



परमाणु ऊर्जा शिक्षण संस्था
Atomic Energy Education Society

वार्षिक परीक्षा- अभ्यास प्रश्नपत्र-I / Annual Examination Practice Paper-I

कक्षा / Class : III

अवधि / Duration : 3 hours

विषय / Subject : ENGLISH

अधिकतम अंक / Maximum Marks : 80

SECTION A - READING (20 MARKS)

A1. Read the following lines and answer the questions.

Most always, when the postman comes

With letters, two or three,

They're for my Mother or my Dad

But never one for me.

I'm going to write some letters, though,

That's what I'm going to do,

And then my friends will answer me

And I'll get letters too!

Q1. Choose the correct answer and fill in the blanks. (2)

i. The child is going to write letters to his _____.

a) friends b) parents c) postman

ii. We drop letters in a _____.

a) mailbox b) tiffin box c) suggestion box

Q2. Fill in the blank space. (2)

i. The opposite of 'always' is _____.

ii. A word from the poem which means 'reply' is _____.

Q3. Answer the following. (1)

- i. Does the child ever get a letter?
-

A2. Read the following passage and answer the questions.

One night the mother tiger was tired and closed her eyes. The tiger cub saw a tiny frog, hopping along the ground. The tiger cub pounced, but the frog hopped away. He chased the frog and caught it, and turned to show his mother. But she was not in sight. Instead, he saw a tiger, bigger than his mother, near him in the jungle.

Q1. Choose the right answer and fill in the blanks. (2)

i. The tiger cub _____ the frog and caught it. (pounced/chased)

ii. The tiger cub saw _____ after catching the frog.

(another tiger / his mother)

Q2. Find words from the above lines which mean (2)

i. to go after someone to catch them- _____

ii. small in size - _____

Q3. Complete the sentence. (1)

i. The tiger cub saw a tiger which was _____ than his mother.

A3. Read the unseen passage and answer the following questions.

Aarti is Manu's best friend. She is getting ready to go to Manu's birthday party which is in the evening. She bought a big book of stories as a birthday gift for Manu. Aarti wants to wrap it in red colour paper. She knows that red is Manu's favourite colour but she is not able to find any red paper. Aarti becomes sad. Looking at Aarti's sad face her mother asks her to wrap the gift in her red scarf. As soon as she hears this, she feels pleased.

Q1. Choose the correct answer and tick it. (4)

i. Who is Manu's best friend?

- a. Aarti b. his mother c. Aarti's mother d. Aarti's father

ii. What does Aarti buy for Manu's birthday?

- a. red paper b. red scarf c. cake d. book of stories

iii. Which colour is Manu's favourite ?

- a. red b. blue c. green d. yellow

iv. What does Aarti's mother suggest ?

- a. to wrap the gift in red paper
b. to wrap the gift in red scarf
c. to wrap the gift in gift paper
d. to buy cake as a birthday present

Q2. Fill in the gaps with the correct answer. (4)

- i. The word “_____” from the passage means to cover.
- ii. The past tense of the word “buy” is _____.
- iii. Manu’s birthday party was in the _____.
- iv. The word from the passage which means ‘happy’ is _____.

Q3. Answer the following questions. (2)

- i. Why was Aarti getting ready?

- ii. What does Aarti want to wrap the gift in?

SECTION B TEXTUAL QUESTIONS (10 MARKS)

Q1. Answer the following questions in one or two words only. (2)

- i. What do you see in a mailbox?

- ii. Which animal is called the ship of the desert?

Q2. Answer the following questions in complete sentences.

(8)

i. Why did mother tiger like to roar?

Ans: _____

ii. Why did the puppy want to go with the boy?

Ans: _____

iii. What does the camel eat in the desert?

Ans: _____


iv. What are the precious loads that trains carry?

Ans : _____

SECTION C - CREATIVE WRITING (10 MARKS)

C.1 . Look at the picture and write five sentences about it.

(5)



C2. Write a letter to your friend telling her/him about your school. You can use some of these words. (5)

classrooms	students	library	playground	teachers	building
-------------------	-----------------	----------------	-------------------	-----------------	-----------------

SECTION - D GRAMMAR – (15 MARKS)

1. Write the opposite of (2)

- i. clean - _____ ii. curly - _____

2. Add ‘-ish’ to make a new word from the word in the bracket and fill in the blank. (1)

- i. The baby is asking for the moon. She is _____. (baby)

3. Write the young one of a (2)

- i. horse - _____

- ii. cow - _____

4. Write the rhyming word for (1)

- i. train - _____

5. Do as shown in the example. (1)

ex: take - took

- i. creep - _____

6. Add ‘-ly’ to the words to make new words. (2)

- i. love - _____ ii. real - _____

7. Add ‘-ful’ to the following words to make new words. (2)

- i. beauty - _____ ii. use - _____

8. **Fill in the gaps.** (2)

i. One calf , many _____

ii. One berry , many _____

9. **Fill in the blanks with the opposites of the underlined words.** (2)

i. The tea is hot but the juice is _____.

ii. Trees are _____ but bushes are short.

SECTION - E VOCABULARY (10 MARKS)

1. **Write another word for** _____ . (3)

i. people travelling by a public transport _____

ii. frightened _____

iii. huge in size _____

2. **Make two words from the word given.** (2)

i. WONDERING - _____

3. **Write the full form of** _____ (1)

i. we're _____

4. **Write one word for** _____ (2)

i. one who makes people laugh - _____

ii. one who repairs or mends our shoes - _____

5. Write the sounds that the following animals make. (2)

example : a dog - barks

i. an elephant - _____

ii. a tiger - _____

SECTION - F SPELLINGS (10 MARKS)

1. Rearrange the letters and make words. (3)

i) h r o t n _____ ii) t u i q e _____ iii) t n i g a _____

2. Fill in the missing letters. (3)

i. e n ____ ____ g h ii. p r ____ ____ i o u ____ iii. d ____ w ____

3. Circle the correct spellings. (2)

i. vehicels vehicles vehicless

ii. twitched twiched twitcheed

4. Pick the silent letters in the following words and write in the blanks. (2)

i. walk _____

ii. glisten _____

Lined writing area with multiple horizontal lines.



परमाणु ऊर्जा शिक्षण संस्था

Atomic Energy Education Society

वार्षिक परीक्षा- अभ्यास प्रश्नपत्र-II / Annual Examination Practice Paper-II

कक्षा/Class : III

अवधि / Duration: 3 Hours

विषय/Subject :English

अधिकतम अंक/Maximum Marks: 80

Section A- Reading (20 Marks)

A1 Read the passage carefully and answer the questions given below.

There was a mother tiger and her small tiger cub. They lived near a river in a shady jungle. When the sky was dark, the mother tiger hunted for deer and pig. The tiger cub stayed close by his mother's side.

A1.1 Tick the correct answer.

(3x1=3)

i) When did the mother Tiger hunt?

a) When the sky was blue

b) When the sky was white

c) When the sky was dark

d) When the sky was red

ii) The mother tiger hunted for -

a) the little cub

b) wolf and fox

c) fire and ice

d) deer and pig

iii) Where did mother tiger live?

a) In a river

b) In a shady jungle

c) In the dark sky

d) In a white desert

A1.2 Do as directed.

(2x1=2)

i) Find the word from the passage which means-

A place that provide shelter from the sun

ii) Write any one 'describing' word from the passage

A2 Read the passage carefully and answer the questions given below.

One day when the sun shone high in the sky many people were seen climbing up the hill. They were climbing slowly and carefully.

A girl named Meena also climbed the hill with them. Meena was twelve years old. She carried a small boy on her back. He was four years old. His hair were curly. His eyes were black and his face was as fresh as the morning dew.

A2.1 Tick the correct answer.

(3x1=3)

i) What did Meena carry on her back?

- | | |
|----------------|----------------|
| a) a big boy | b) a small boy |
| c) some people | d) morning dew |

ii) People were climbing up the hill

- | | |
|-------------------------|------------------------|
| a) quickly | b) slowly and steadily |
| c) slowly and carefully | d) very quickly |

iii) How old was Meena?

- | | |
|---------------|-----------------|
| a) Ten years | b) Twelve years |
| c) Nine years | d) Eight years |

A2.2 Do as directed

(2x1=2)

- i) The opposite word of 'straight' from the passage is _____
- ii) A word from the passage that means 'new and clean'. _____

A3 Read the passage carefully and answer the questions given below.

Here comes the parrot! There are so many! Five, four or three?

Oh how beautiful it is. They are green and have red beaks. I hope the parrots sit on our terrace. Look how the parrots are making their nests! Some have gone to find food for their babies. Shall we help them or not.

I hope they keep coming every day. They are so pretty. If the parrots fly away, we will follow and see where they go.

A3.1 Choose the correct answer (2x1=2)

- i) The parrots have _____ beak.
a) green b) red c) blue d) orange
- ii) Where have some parrots gone?
a) to find food b) to make nest
c) to become pretty d) to sit on terrace

A3.2 Write true and false. (3x1=3)

- i) The colour of the parrots is red. ()
ii) The passage is about children. ()
iii) Children hope that parrots keep coming every day. ()

A3.3 Find the opposite word of 'stand' from the passage _____ (1)

A3.4 A word from the passage for 'a place for fun and relaxation' _____ (1)

A3.5 Do as directed (2x1=2)

- i) The present form of action word 'go' in the passage is _____
ii) Write the full form of **it's**. _____

A3.6 Complete the given sentence (1)

Look how the parrots _____.

Section -B Textual questions (10 Marks)

B1 Answer the following questions. (2x1=2)

i) What does the child decide to do?

ii) Where does the camel store its food?

B2 Answer the following questions:

(4x2=8)

i) Where was the man going?

ii) What is the secret the speaker is hiding?

iii) What happened to the little tiger cub when he chased the frog?

iv) What does the camel eat in the desert?

Section C- Creative Writing 10 Marks

C1 Look at the picture and write five sentences about it.

(5)



C2. Write a letter to your grandfather thanking him for a birthday gift. (5)

Section D-Grammar (15 marks)

D1 Do as directed

D1.1 Use can / cannot in the following sentences.

(2x1=2)

- i) I _____ hear the sound of moving car.
- ii) I _____ count my hairs.

D1.2 Write the past (V2) form of the following action words. (2x1=2)

i) eat _____ ii) climb _____

D1.3 Fill in the blanks with rhyming words. (2x1=2)

i) get _____

ii) fine _____

D1.4 Write the full form of the following words. (2x1=2)

i) can't _____ ii) that's _____

D1.5 Underline the describing words in the given sentences. (2x1/2=1)

i) My father cooks delicious kheer.

ii) The peacock is a beautiful bird.

D1.6 Choose the correct word from the brackets. (2x1=2)

i) The boy fell _____ the pit. (on / in)

ii) There _____ many students in the class. (is / are)

D1.7 Underline the letters which are silent in the given words. (4x1/2=2)

i) s t r a i g h t

ii) c a l m

iii) t a l k

iv) b o r e

D1.8 Make sentences from the following words. (2x1=2)

i) eight: _____

ii) ate: _____

Section E- Vocabulary (10 Marks)

E1 Circle the odd one: (2x1/2=1)

i) bottle wool eggs milk

ii) puppy lamb mail colt

E2 Fill in the blanks with the words given in the brackets. (2x1/2=1)

i) A _____ looks after the patient. (nurse / clown)

ii) The young one of goat is called _____. (kid / lamb)

E3 Who am I (2x1=2)

- i) I live in a sty. _____
ii) I can drink 200 bottles of water at a time. _____

E4 Write the opposite of underline words. (2x1/2=1)

- i) The sun appears in the _____ and the moon at night.
ii) Trees are _____ but the bushes are short.

E5 Write one word for the following. (2x1=2)

- i) similar word of mischievous: _____
ii) Seal's move: _____

E6 Add 'ful ' to make a word. (2x1/2=1)

- i) The children are _____.(play)
ii) The vegetables are _____(plenty)

E7 Match the words with their similar meaning. (4x1/2=2)

- | A | B |
|--------------|--------------|
| i) precious | jump high |
| ii) hay | adult person |
| iii) leap | valuable |
| iv) grown-up | dry grass |

Section F- Spelling (10 Marks)

F1 Write the missing letters. (4x1/2=2)

- i) c _ r r y _ n g ii) s t _ a d _ l y

F2 Circle the correct spelling. (2x1/2=1)

- i) naughty notti naugty
ii) excitemint excitement excitment

F3 Circle the word with a 'j' sound. (1)

grey gold giant goose

F4 Write any two words which are hidden in the word ' ROARING'. (2x1=2)

F5 Arrange the words in right order to make a meaningful sentence. (2x1=2)

i) went / school / today / she / to

ii) Priya / are / and / friends / Rani

F6 Correct the spelling of the following wrongly spelt word. (2x1=2)

enogh _____ pheasant _____

Section G- Handwriting (5 Marks)

Read the given paragraph carefully and copy it in neat handwriting. (5)

Honesty is usually regarded as the best policy. Honesty has a real place in every field of life. The present day world gives best chances for the success of honest men. Honesty alone will give you the right place and makes you happy.

परमाणु ऊर्जा शिक्षण संस्था
Atomic Energy Education Society

वार्षिक परीक्षा- अभ्यास प्रश्नपत्र-III / Annual Examination Practice Paper-III

कक्षा / Class : III

अवधि / Duration : 3 hours

विषय / Subject : English

अधिकतम अंक / Maximum marks : 80

Section A (Reading) – 20 marks

A1. Read the passage given below and answer the following questions .

One night the mother tiger was tired and closed her eyes. The tiger cub saw a tiny frog, hopping along the ground. The tiger cub pounced, but the frog hopped away. He chased the frog and caught it, and turned to show his mother. But she was not in sight. Instead he saw a tiger, bigger than his mother, near him in the jungle. The tiger's green eyes glistened as he watched the tiger cub. The tiger cub was frightened. He could not hide or run. He let the frog hop away. The tiger crept up closer to the little tiger cub.

i) Choose the correct answer and write in the blanks . (1x2=2M)

a) The tiger cub saw a tiger, bigger than his _____.

(uncle/ mother / brother)

b) The tiger's green eyes _____ as he watched the tiger cub.

(glistened/closed/ opened)

ii) The opposite of huge is _____ (1x1=1M)

iii) The past tense of see is _____ (1x1=1M)

iv) Who was tired ? (1x1=1M)

Ans. _____

A2. Read the passage given below and answer the following questions .

When we play with pebbles, she thinks they are real food. She even tries to put them into her mouth. When I open a book before her and ask her to learn her a b c, she tears the pages with her hands and roars with joy at nothing. This is your baby's way of doing her lessons. When I shake my head at her in anger and scold her, or call her naughty, she laughs and thinks it great fun. Everybody knows that Father is away, but sometimes I call out "Father" playfully. She looks quickly about her in excitement and thinks that Father is near.

i) Choose the correct option and fill in the blanks . (1x3=3M)

a) The baby thinks that _____ are real food.

(book / moon / pebbles)

b) The baby's father is _____ from her.

(near / up / away)

c) The baby laughs when her brother _____ her.

(plays with / scolds / calls)

ii) Write the opposite of 'far' from the passage . _____ (1x1=1M)

iii) What does the baby do with the pebbles ? (1x1=1M)

Ans. _____

A3. Read the unseen passage and answer the following questions.

A very long time ago, there lived a young businessman. His name was Sindbaad. He was wise and hard working. He always travelled by ship to other countries and was selling dry fruit and clothes. One day as he was on

a ship, there was a great storm. The ship started moving up and down. All the people shouted for help. Lot of water entered the ship. Many people died. But Sindbaad, the sailor jumped into the sea. He swam and came to an island and saved his own life. Next day he found himself lying on a beautiful sea – shore of an island.

i) Encircle the correct answer. (1x4=4M)

a) Who was Sindbaad?

A)tailor B)businessman C)teacher D)doctor

b) How did Sindbaad travel to different countries?

A) by train B) by bus C) by aeroplane D) by ship

c) What things did he sell in other countries?

A) vegetables B) dry fruits and clothes C) toys D) books

d) How did Sindbaad save his own life when there was a storm?

A) by climbing B) by running C) by swimming D) by shouting

ii) Fill in the blanks . (1x 4= 4M)

a) An _____ is a piece of land that is surrounded by water.

b) The plural form of country is _____ .

c) The opposite of foolish is _____ .

d) Strong wind and rain causes _____ in the sea.

iii)Why did Sindbaad go to other countries ? (1x1=1M)

Ans. _____

iv)Write True or False. (1x1=1M)

a) Sindbaad was a lazy old man. _____

Section B (Textual Questions) – 10 marks

B1. Choose the correct answer.

(1x2=2M)

i) What does the camel eat in the desert ?

a) Thorny bushes

b) Sand

c) Fruits

ii) Where was the horse going ?

a) to the village

b) to the hill

c) to the city

B2. Answer the following questions.

(2x4=8M)

i) Where do the trains run ?

Ans. _____

ii) What is the vegetable man selling ?

Ans. _____

iii) What is the secret the speaker is hiding ?

Ans. _____

iv) Where were the people going ?

Ans. _____

Section C (Creative Writing) – 10 marks

C1. Look at the picture and write five sentences on it.

(5x1=5M)



C2. Write five sentences about a camel. You can use the words given below.

(ship , store , water , hump , leaves , padded)

(5x1=5M)

Section D (Grammar) – 15 marks

D1. Write plurals for the following words. (1x2=2M)

i) goose : _____ ii) fox : _____

D2. Rearrange the words to make the meaningful sentences. (1x2=2M)

i) baby/your/wants/the/to/catch / moon

Ans. _____

ii) was/four/he/years/old

Ans. _____

D3. Make a sentence by using the following word. (1x1=1M)

i) climb :

D4. Underline the silent letters in the following words. (1x2=2M)

i) w a l k ii) m o r e

D5. Fill in the blanks with can or cannot . (1x2=2M)

i) A camel _____ walk in the desert.

ii) We _____ read and write.

D6. Underline the action words in the following sentences. (1x2=2M)

i) The lion walks on the padded paws.

ii) The train whistles loudly.

D7. Fill in the blanks with rhyming words. (1x2=2M)

i) Hill : _____ ii) Fine : _____

D8. Choose the correct option and fill in the blanks . (1x2=2M)

i) Last _____ , I had high fever . (week / weak)

ii) She _____ a mango . (eight / ate)

Section E (Vocabulary) – 10 marks

E1. Fill in the blanks with the opposite of the underlined word given in the sentence. (1x2=2M)

i) The rat ran in when the cat ran _____ .

ii) The lion is big but the ant is _____ .

E2. Write the young ones of the following animals. (1x2=2M)

i) Cat : _____

ii) Tiger : _____

E3. Write the antonym (opposite word) of – (1x1=1M)

i) morning x _____

E4. Give one word for the following group of words. (1x3=3M)

i) dry grass : _____ ii) a period of two weeks : _____

iii) travellers in a public vehicle : _____

E5. Add -ly/-ish to make new words. (1x2=2M)

i) fool : _____

ii) love : _____

Section F (Spelling) – 10 marks

F1. Circle the words with correct spellings. (1x3=3M)

i) thoussand thousand thoudsand

ii) caliuflower cawliufoar cauliflower

iii) creature craetru creaturresa

F2. Make correct words from the jumbled letters. (1x2=2M)

i) semou : _____

ii) peshe : _____

F3. Fill in the blanks to make meaningful words. (1x2=2M)

i) D _ se _ t

ii) New _ pap _ r

F4. Correct the wrong spellings and write again . (1x3=3M)i)

i) enouuhg : _____

ii) brothher : _____

iii) moilbox : _____

Lined writing area consisting of multiple horizontal lines for text entry.



परमाणु ऊर्जा शिक्षण संस्था
Atomic Energy Education Society

वार्षिक परीक्षा- अभ्यास प्रश्नपत्र-I / Annual Examination Practice Paper-I

कक्षा / Class : III

अवधि / Duration : 3 Hours

विषय / Subject : EVS

अधिकतम अंक / Maximum Marks : 80

4. On completion of the exam, the answer sheet must be handed over to the school.

Section A: Observation and Reporting (30 marks)

Q1. Fill in the blanks .

(10 x 1 = 10)

a) A football game has _____ (11 / 10) players in each team.

b)



It is the _____ part of the plant.(stem / root)

c) It is a _____ board(chess /carrom) . It has _____ squares.(100 /64)



d) Sitamma lived in a small city _____. (Guntoor / Chennai)



e) He is _____. (Einstein / Louis Braille)

f) Bhupen lived at Molan village in _____ state. (Bihar / Assam)

g) Houseboats are usually seen in _____. (Rajasthan/ Kerala)

h) This is a _____ crossing. (Zebra / Giraffe)



i) _____ are woven to make a cloth. (Papers / Thread)

j) King, Queen, Ace and Jack. Fifty two of them make a pack. Identify the name of the game? _____ (Chess / Playing Cards)

Q2. Write 'T' for True and 'F' for False statements.

(5 x 1 = 5)

a) Braille Script cannot be written on computers. ()

b) Everyone in the family should share responsibilities. ()

c) We should overload animals with work. ()

d) Dal Lake is situated in Srinagar. ()

e) Ahmed lives in Agartala. ()

Q3. Answer the following questions.

(5x2=10)

a) Who is the father of Braille Script?

b) What is a map?

c) Write any two ways of saving water.

d) Why do many people in New Delhi live in slums?

e) Who takes care of Tara ? And how ?

Q4. Observe the picture and write at least five lines.

(5)




Section B: Identification and Classification (25 marks)

Q5. Name the medicinal plant which will give you relief when- (5)

Turmeric, Neem , Basil, Ajwain , Cloves

- a) You get hurt by falling from stairs : _____
- b) You have a bad stomach ache : _____
- c) You have severe toothache : _____
- d) You have cough and cold : _____
- e) You have some skin irritation : _____

Q6. Identify the pictures and write their names. (2)





Q7. Select the best option.

(3)

a) The web of life includes-

i) Living beings ii) Non-living things

iii) Both (i) and (ii) iv) None of these

b) If you are facing the North direction, which direction is to your left?

i) East ii) West

iii) North iv) South

c) All around in Bajju village, we see –

i) Water ii) Sand

iii) Grass iv) Forest

Q8. Answer the following questions.

(5 x 2 = 10)

a) Two sources of water:

b) What do Sara and Habib's family do on holidays?

c) Name two animals which give milk for people to drink:

d) What did Chachi use for making the doll?

e) Arrange the following process in the correct order by putting numbers in the boxes.



Q9. List five ways to take care of a pet/domestic animal.

(5)

Section C: Discovery of Facts (25 marks)

Q10. Circle the odd one.

(5 x 1 = 5)

- | | | | |
|-------------|----------|--------|---------|
| a) Turmeric | Tulsi | Egg | Ginger |
| b) Cabbage | Turmeric | Ajwain | Chilli |
| c) Lemon | Orange | Garlic | Mosambi |
| d) Air | Water | Food | Rat |
| e) Dog | Goat | Lion | Cow |

Q11. Choose the correct option.

(5 x 1 = 5)

- a) A letter reaches the desired destination because _____
- i) The postman knows where it shall reach
 - ii) The desired address is mentioned on the letter
 - iii) The letter is stamped
 - iv) The receiver collects it from post office
- b) With which game is P V Sindhu associated _____
- i) Chess
 - ii) Lawn tennis

iii) Badminton

iv) Cricket

c) Which of the following is a pet animal ? _____

i) Lion

ii) Panther

iii) Rabbit

iv) Rhinoceros

d) Thread work done on cloth is called _____

i) Carving

ii) Sculptor

iii) Pottery

iv) Embroidery

e) Blind people read books in Braille script by _____

i) Touching and feeling

ii) Hearing and smelling


iii) Seeing and hearing

iv) None of these

Q12. Answer the following questions.

(5 x 2 = 10)

a) Draw any two roots that you eat and colour them.



b) What do living things need to live?

c) Who all helped the crow to make the pot ?

d) Make a list of the materials required for building a mud house.

e) Write your address on the postcard.

The diagram shows a rectangular postcard layout. A vertical line divides the postcard into two main areas. The left area is a large, empty rectangular space. The right area is narrower and contains a small rectangular box in the top right corner, likely for a stamp. Below this box are five horizontal lines stacked vertically, intended for writing an address.

Q13. Observe the picture and write at least five lines.

(5)





परमाणु ऊर्जा शिक्षण संस्था
Atomic Energy Education Societ

वार्षिक परीक्षा- अभ्यास प्रश्नपत्र-II / Annual Examination Practice Paper-II

कक्षा/Class : 3 (तीसरी)

अवधि / Duration : 3घंटे

विषय/Subject : EVS

अधिकतम अंक/Maximum Marks : 80

2. All questions are compulsory.

3. Ensure the questions from each section are answered.

Section A: Observation and Reporting (30 marks)

Q1. Observe the given pictures. Choose the correct option and fill in the blanks. 1x6=6]

Ravi bhैया carries a _____



stick. (red, yellow, white)

a) Pots are baked in _____.



(kiln, oven, stove)

b) _____ are used mostly




by travellers and soldiers.(kutchha house, pucca house, tent)

c) _____ is the head of the post office.




(Principal, Post Master, Clerk)



d) _____ is in Srinagar.

(Dal Lake, Ganga River, Yamuna River)



e) Meenu called her cow as _____.

(Radha , Bholi , Bali)

Q2) Look at the picture and match.

[1x4 = 4]



(Multi-storeyed building, Tent, Igloo , Houseboat)

Q3) Give any two examples :

[1x6=6]

a) Two leafy vegetables.

b) Two means of personal communication.

c) Two animals which carry loads.

d) Two daily activities that need water.

e) Two types of letters.

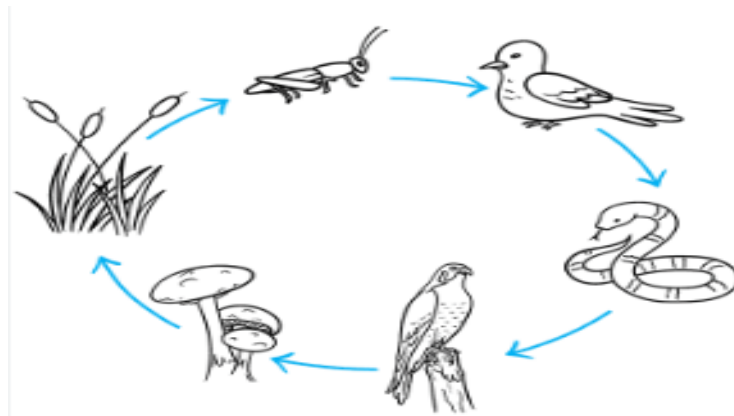
f) Two symbols of mathematics that are also used in a map.

Q4) Given below is the journey of a letter shown through pictures. The pictures are not in a sequence. Arrange these to get the correct sequence, putting number in the circles. [1/2X8=4]



Q5. Look at the picture and answer the questions given below.

[5]



A)


1) Name the picture.

[1]

2) Write a sentence about it.

[1]

B)

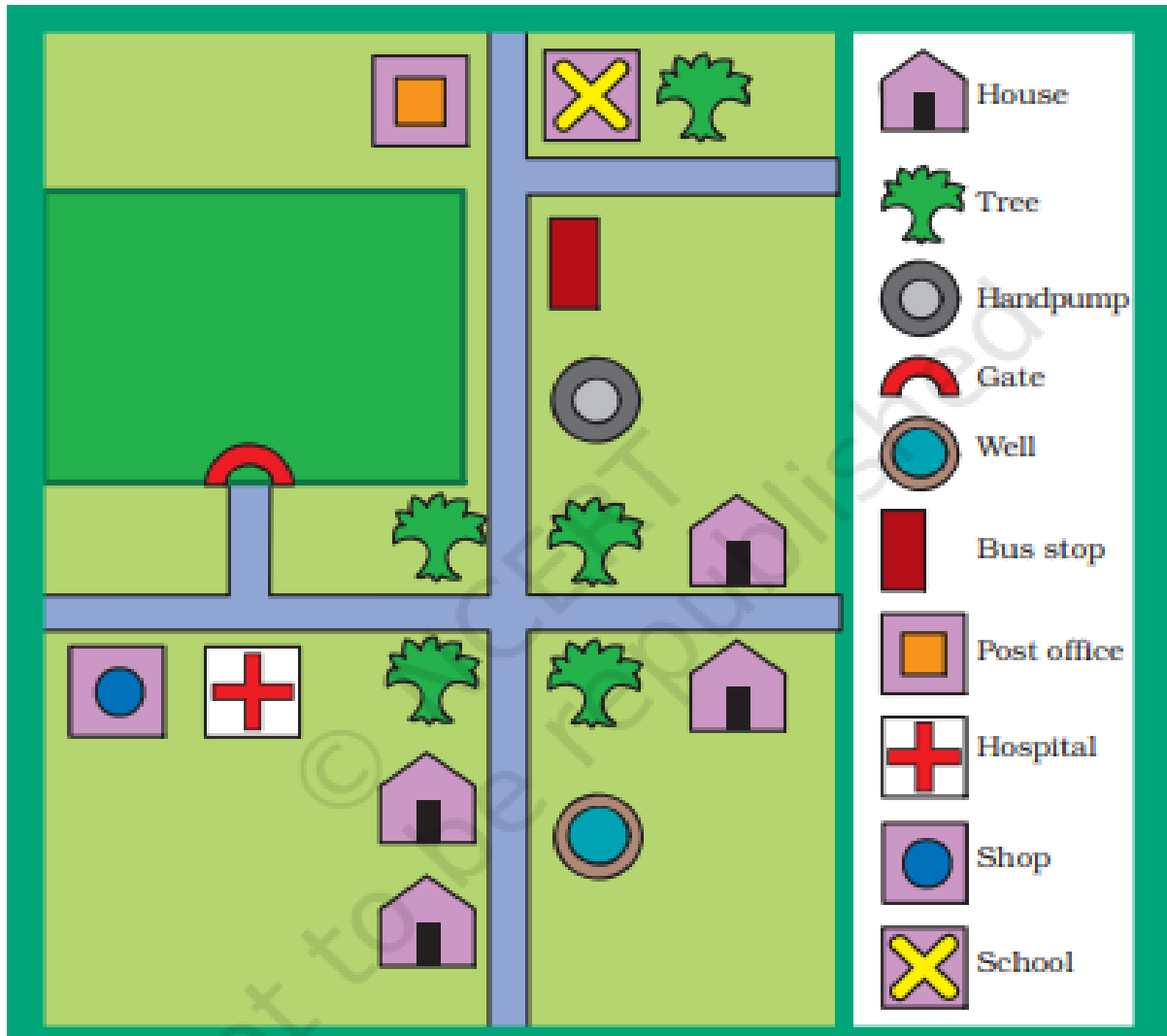


1) Name the script given above_____.

[1]

2) Name the person who invented the script and the place he belonged to. [2]

Q6) A list of symbols used in the map is given. Look carefully and write.
[1x5 = 5]



- a. How many houses are there in the map? _____
- b. How many shops are there in the map? _____
- c. How many trees are there in the map? _____
- d. What is near the bus stop? _____
- e. Is the school closer to the post office or to the hospital?
-

Section: B Identification and Classification (25 marks)

Q7. Identify the given pictures and write their names below it.


[1X5=5]



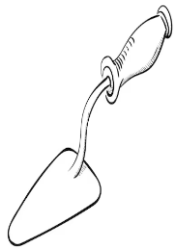
a. _____




b. _____



c. _____



d. _____



e. _____

Q8. Classify the following games into two groups.

[1x2=2]

Cricket	Chess	Hopscotch	Table tennis
---------	-------	-----------	--------------

Outdoor games	Indoor games

Q9. Answer the following questions.

[2X2=4]

a) Who all helped the crow to make pot?

b) What are the things the family members do together?

Q10. Name the following.

[1X4=4]

a) In Srinagar House boat is also known as _____.

b) National game of India _____.

c) Pashmina shawl belongs to the state of _____.

d) Leaves that we eat (any one) _____.

Q11. Circle the odd one out.

[1X4=4]

a) Radish Cauliflower Mango Brinjal




b) Lamp Chair Bird Table

c) Egg Turmeric Mint Ginger

d) Telephone Postcard E-mail Whatsapp

Q12. Identify the animals and find out in what way they are helpful to human being:

[2x3=6]

Picture	Name of the animals	Used For
		
		
		

Section: C Discovery of Facts (25 marks)

Q13. Write Yes / No against the following statements. [1x5=5]

- a. Letters are sorted in shops. (_____)
- b. The family members love each other very much. (_____)
- c. Old people enjoy eating soft food. (_____)
- d. Virat Kohli plays for Indian Hockey team. (_____)
- e. Saree is used as un-stitched piece of fabric. (_____)

Q14. Answer the following questions. [2x2=4]

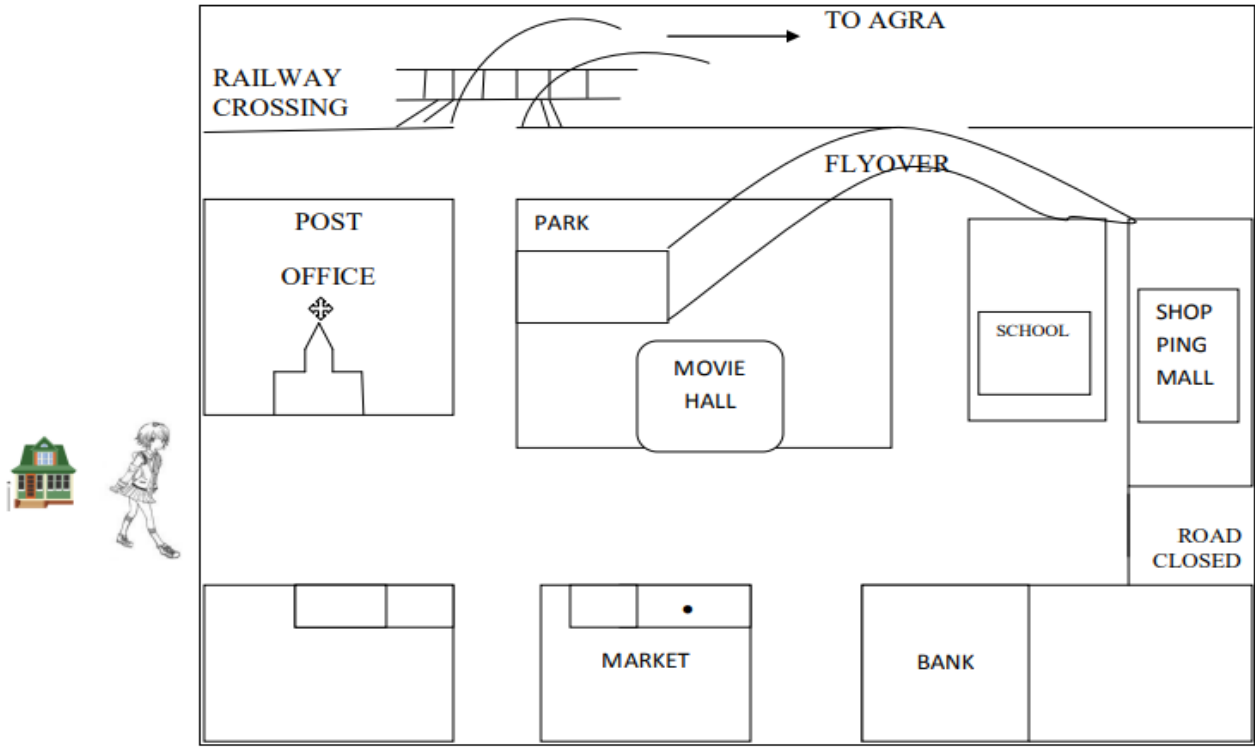
- a. Write two ways of saving water.

- b. What do living things need to live?

Q15. Match the following. [1x5=5]

- | | |
|----------------|-------------------------------------|
| a) Seven tiles | beehive |
| b) Igloo | Man - made |
| c) Blacksmith | outdoor game |
| d) Honey | a person who makes things with iron |
| e) Telephone | snow house |

Q16. Look at the map given below. You are in front of your house. Answer the questions that follow. **[1x2= 2]**



- a. You have to take _____ turns to reach Shopping Mall.
- b. On your way to school, you will have Market on your _____ side.

Q17. Rearrange the “Process of making pots” in the correct order and write the sentences in space given below. **[1/2 x 4 = 2]**

- a) He gives the shape to the clay on a wheel.
- b) The potter digs the soil from a clay-pit.
- c) He bakes the pots in a kiln.
- d) He kneads the soil into clay.

Q18. Answer in one sentence.

[1x 4=4]

a) How do people enter the houses built on bamboo pillars?


b) Why do we need clothes?

c) How should we take care of pet animals?

d) How do you depend on the sun?

Q19. Draw, colour and label the parts of a plant.

[3]





परमाणु ऊर्जा शिक्षण संस्था
Atomic Energy Education Society

वार्षिक परीक्षा- अभ्यास प्रश्नपत्र-III / Annual Examination Practice Paper-III

कक्षा / Class : III

अवधि / Duration : 3hrs

विषय / Subject : EVS

अधिकतम अंक / Maximum Marks : 80

Section A: Observation and Reporting (30 marks)

I. Fill in the blanks with the correct words given in the brackets.

(10X1M=10)

1. The state of _____ gets very less rainfall. (Maharashtra/
Rajasthan)
2. Clove helps to cure a _____. (stomach ache
/toothache)
3. A pin code has _____ digits. (5 / 6)
4. A chess board has _____ squares. (64/74)
5. The _____ is the fastest means of communication. (telephone
/ postcard)
6. Louis Braille belonged to _____. (Russia /France)
7. Chameli lived in _____. (Manali /Delhi)
8. Kahwa is prepared with _____ and _____ (almonds and
cardamom/ tea leaves and sugar)

9. The walls of houses in Rajasthan are very _____.

(thick/thin)

10. Thread work done on cloth is called _____. (carving /embroidery)

II. Name the following

(5X2M=10)

i) Any two indoor games.

ii) Any two games played with a ball.

iii) Any two things needed to make a pot.

iv) Any two uses of water.

v) Any two things needed to build a pucca house.

III. Give one example of

(7x1M= 7)

i) An animal you cannot touch - _____

ii) A game we play outdoor - _____

iii) An animal which gives wool - _____

iv) A tool used for digging soil. _____

v) A vegetable that can be eaten raw and cooked. _____

vi) This script is based on six points. _____

vii) A person who makes clay pots, pans and diyas. _____

IV. When you are sick, we often take medicines that we get from plants.

Pick out the medicinal plants from the brackets & fill in the blanks.

(3X1M=3)

(clove ,turmeric ,ajwain , tulsi)

◆ get hurt _____ ◆ have a stomach ache _____

◆ have cough and cold _____ ◆ have a toothache _____

Section B: Identification and Classification 25 marks

V. Solve the following riddles and write the name of the game.(2X1M=2)

a) Small and coloured are these glass balls, To win the game you have to aim with them all. _____

b) On the board are squares black and white, There's the king, the queen and the knight. _____

VI. Circle the odd one out **(4X 1/2M=2)**

i) honey, turmeric, fish


ii) kabaddi, gillidanda ,chess

iii) hut , flat , shikara


iv) cat , lion , dog

VII. Name the pictures


(6x1M= 6)



a) _____



b) _____



c) _____



d) _____



e) _____



f) _____

VIII. Match the following and write the answers in the space given below:

(4X½M=2)

i) Sitamma's family

a) grandfather

ii) mother's father

b) capital of India

iii) New Delhi

c) Srinagar

iv) Dal lake

d) joint family

IX. Answer the following questions

(4x2M =8)

1. How is houseboat different from other houses?

2. How can we save water? (any two ways)

3. Write 2 sentences about the Braille Script.

4. What is the similarity in the roofs of Chameli's and Bhupen's houses?

X. Draw lines to show which work will be done after the other so that the

Washing hands and face

Washing clothes

Washing fruits and vegetables

Using in the toilet

same water can be re- used (1x3M=3)

Watering plants

Mopping the floor

XI Tick ✓ the correct statements and × for the wrong ones: (4X 1/2M= 2)

a) We must keep the taps open while brushing our teeth. _____

b) It rains heavily in Assam . _____

c) Char Chinari is in Mumbai . _____

d) Lawn tennis is an outdoor game. _____

Section C: Discovery of Facts (25 marks)

XII. The names of some food items are given below. Write the names in the correct column. (12x1/2M=6)

(egg,ginger,turmeric,fish,butter,pear,chicken,cheese,tulsi,grapes,rice,honey)

Food items we get from plants	Food items we get from animals

XIII.. Write 5 ways in which we can save water.



(5X1M=5)

XIV. Draw and colour the following

(2x2M=4)


i) A post box

ii) A container used to store water




XV. Draw ,name and colour any two vegetables that you eat and and colour them.

(2x2M=4)

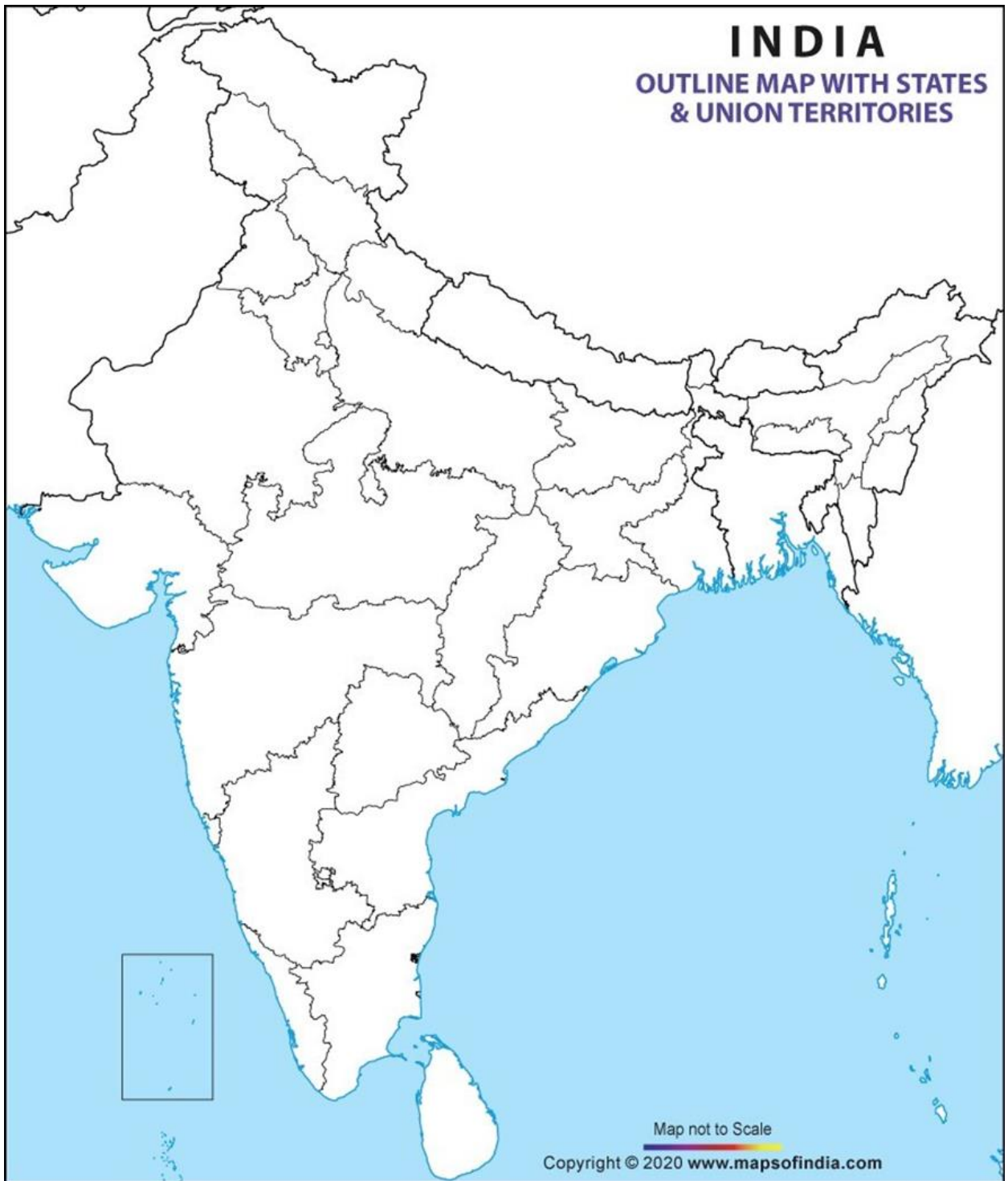


**XVI. On the postcard given below write your complete postal address.
(1x3M=3)**



XVII. Mark the following states in the map of India. (3X1M =3)

- 1) Karnataka 2) Maharashtra 3) Gujarat**



परमाणु ऊर्जा शिक्षण संस्था

Atomic Energy Education Society

वार्षिक परीक्षा- अभ्यास प्रश्नपत्र-I / Annual Examination Practice Paper-I

कक्षा / class : III (तीसरी)

अवधि / Duration : 3 घंटे

विषय / Subject : हिन्दी /Hindi

अधिकतम अंक / Maximum Marks : 80

पठन क्षमता पर आधारित प्रश्न

प्र1. नीचे लिखे गए पठित गद्यांश को पढ़कर पूछे गए प्रश्नों के उत्तर लिखो।(5)

अवंती ने एक छोटी - सी रंगाई की दुकान खोली और गाँवासियों के लिए

कपड़ा रंगना शुरू कर दिया। सब लोग उसकी रंगाई की प्रशंसा करने लगे।

धीरे - धीरे उसकी दुकान चल निकली। अवंती की प्रशंसा सुनकर एक सेठ को

बहुत ईर्ष्या महसूस होने लगी। अवंती को परेशान करने के लिए वह सेठ कपड़े

का एक टुकड़ा लेकर अवंती की दुकान में जा पहुँचा।

(क) अवंती ने किसकी दुकान खोली?

उ)-----

(ख) अवंती की प्रशंसा सुनकर किसको ईर्ष्या होने लगी? (सही उत्तर चुनो।)

i) पड़ोसियों को

ii) सेठ को

iii) गाँवासियों को

(ग) सेठ कपड़े का टुकड़ा लेकर किसकी दुकान पर जा पहुँचा?

उ)-----

(घ) उल्टे अर्थ वाला शब्द (विलोम शब्द) लिखो।

धीरे x -----

(ङ) नीचे लिखे शब्द का अर्थ लिखो।

ईर्ष्या = -----

प्र2. नीचे लिखे गए पठित गद्यांश को पढ़कर पूछे गए प्रश्नों के उत्तर लिखो।(5)

मीरा बहन का जन्म इंग्लैंड में हुआ था। गांधी जी के विचारों का उन पर इतना असर हुआ कि वे अपना घर और अपने माता - पिता को छोड़कर भारत आ गईं और गांधी जी के साथ काम करने लगीं। आज़ादी के पाँच साल बाद उन्होंने उत्तर प्रदेश के पहाड़ी गाँव, गेंवली में गोपाल आश्रम की स्थापना की। उस आश्रम में मीरा बहन का बहुत सारा समय पालतू पशुओं की देखभाल में बीतता था लेकिन गेंवली गाँव के आसपास के जंगलों में बाघ जैसे खतरनाक जानवर भी रहते थे।

(क) गांधी जी के विचारों का मीरा बहन पर क्या असर पड़ा?

उ) -----

(ख) मीरा बहन ने किस आश्रम की स्थापना की?

उ)-----

(ग) गेंवली गाँव के आसपास के जंगलों में किस तरह के जानवर रहते थे?

उ) -----

(घ) नीचे लिखे शब्द का लिंग बदलो।

बाघ - -----

(ङ) गद्यांश देखकर खाली स्थान भरो।

मीरा बहन का जन्म _____ में हुआ था।

प्र3. अपठित गद्यांश को पढ़कर पूछे गए प्रश्नों के उत्तर लिखो। (10)

एक बार एक धनी व्यक्ति रिक्शा पर बैठकर बस -स्टैंड की तरफ जा रहा था। उसके पास अधिक सामान था। मार्ग में ही उसे वह बस मिल गई। जिस पर वह जाना चाहता था। वह अपना सामान लेकर बस में चढ़ गया। रिक्शे वाले को पैसे देते समय उसका थैला रिक्शे में ही छूट गया। रिक्शे वाले की नज़र उस थैले पर पड़ी। उसने देखा कि उसमें एक डायरी और पाँच हज़ार रुपए थे। डायरी में उस आदमी का नाम और पता लिखा हुआ था। उस रिक्शे वाले ने डाकघर जाकर उस आदमी के रुपए मनीआर्डर करवा दिए। रिक्शा वाला गरीब था, मगर वह एक ईमानदार व्यक्ति था। उसको पराए धन का लालच नहीं था।

(क) धनी व्यक्ति रिक्शा पर बैठकर कहाँ जा रहा था?

उ) -----

(ख) धनी व्यक्ति के पास क्या अधिक था?

उ) -----

(ग) धनी व्यक्ति का थैला कहाँ छूट गया?

उ) -----

सही विकल्प चुनकर सही (✓) का निशान लगाओ।

(घ) धनी व्यक्ति सामान लेकर किस पर चढ़ गया?

- i. बस में ii. रेलगाड़ी में iii. बैलगाड़ी में

(ङ) डायरी में कितने रूपए थे?

- i. दो हज़ार ii. सात हज़ार iii. पाँच हज़ार

(च) रिक्शे वाले ने धनी व्यक्ति के रुपयों का क्या किया?

- i) बाज़ार में खर्च कर दिए ii) मनीआर्डर करवा दिए iii) बैंक में जमा कर दिए

(छ) रिक्शा वाला कैसा व्यक्ति था?

- i. ईमानदार ii. लालची iii. स्वार्थी

(ज) गद्यांश में से ज़ पर नुक्ता वाला एक शब्द ढूँढ़कर लिखो।

(झ) गद्यांश में से नीचे लिखे शब्द का बहुवचन शब्द ढूँढ़कर लिखो।

रुपया -----

(ञ) नीचे लिखे शब्द का सही समान अर्थ चुनकर लिखो।

मार्ग = ----- (रास्ता / घर)

पाठ्य पुस्तक पर आधारित प्रश्न

प्रश्न 4. निम्नलिखित प्रश्नों के उत्तर लिखो।

(क) गुठली वाले दो फलों के नाम लिखो। (1)

उ) -----

(ख) तुम्हारे मुँह में किन-किन चीज़ों को देखकर पानी आता है? (1)

उ) -----

(ग) शिवदास ने गुरुजी की थैली देखकर अपनी गाड़ी क्यों दे दी ? (2)

उ) -----

(घ) नाना मुझे झाड़ - फूँक वाले आदमी के पास क्यों ले गए ? (2)

उ) -----

(ङ) पिजंड़ा बिना बाघ के बंद हो गया। कैसे ? (2)

उ) -----

(च) सारी मिर्चे खाने के बाद काबुलीवाले की क्या हालत हुई होगी ? (2)

उ) -----

रचनात्मक लेखन पर आधारित प्रश्न

प्रश्न5. नीचे दिए गए चित्र को देखकर पाँच वाक्य लिखो। (5)



प्रश्न 6. 'साँप' अथवा 'पेड़' के बारे में पाँच वाक्य लिखो। (5)

प्रश्न 7- व्याकरण पर आधारित प्रश्न

(क) हम इन कामों के लिए कहाँ जाते हैं? लिखो। (2)

- i. दूध खरीदने -----
- ii. जूते की मरम्मत करवाने -----

(ख) नीचे दिए गए शब्दों में से घर से संबंधित शब्दों पर घेरा लगाओ। (2)

बरामदा नहर आँगन सड़क

(ग) नीचे लिखे वाक्य में (! ? |) सही का निशान लगाओ। (1)

तुम्हें यह कहानी कैसी लगी

(घ) हाथी की आवाज़ को _____ कहते हैं। (सही उत्तर चुनो और लिखो।) (1)

- i. चिंघाड़ना ii. रँभाना iii. दहाड़ना

(ङ) सही शब्द चुनकर कविता की पंक्तियाँ पूरी करो। (2)

(मीठा, दाने , झोली)

सोचा, क्या अच्छे ----- है, खाने से बल होगा।

यह जरूर इस मौसम का कोई ----- फल होगा।

(च) इन मौकों पर तुम किस पेड़ के पत्ते का इस्तेमाल करोगे? (1)

- i. बारिश में भीगते समय छाते की तरह -----

(छ) उदाहरण के अनुसार शब्द बनाओ। (2)

उदा - रंग - रंगाई

- i. पढ़ - ----- ii. बुन- -----

(ज) नीचे लिखी हुई चीज़ें क्या हैं? खाली जगह में लिखो। (2)

उदा - बाघ , गाय , बकरी , हिरन - जानवर

- i. नर्मदा, कावेरी, सतलुज, यमुना - -----

- ii. गेहूँ, बाजरा, चावल, मक्का - -----

(झ) नीचे दिए गए वाक्यों में कुछ हरी - भरी सब्जियों के नाम छुपे हैं। उन्हें ढूँढ़कर लिखो। (2)

- i. अब भागो भी, बारिश होने लगी है। -----
ii. मामू लीला मौसी कहाँ है? -----

प्रश्न 8- शब्द भंडार पर आधारित प्रश्न

(क) नीचे लिखे शब्दों के सही अर्थ चुनकर लिखो। (2)

(ज़रूर इरादा तारीफ़)

- i. प्रशंसा = ----- ii. अवश्य = -----

(ख) दिए गए शब्दों में मात्रा बदलकर नए शब्द बनाओ। (2)

उदा- मेल -- मैल जाल -- जाला

- i. बेल -- ----- ii. खान -- -----

(ग) नीचे लिखे शब्द के लिए दो अलग - अलग अर्थ लिखिए। (2)

उदा- हार - माला, पराजय

- i) जल - -----

(घ) सही शब्द चुनकर मुहावरें पूरे करो। (2)

(ग्यारह, आस्तीन, दीया)

- i. ----- तले अँधेरा

- ii. एक और एक -----

(ड) नीचे लिखे शब्दों से वाक्य बनाओ। (2)

i. धीरे - धीरे -

ii. पीछे - पीछे -

प्रश्न 9 - वर्तनी पर आधारित प्रश्न

(क) नीचे दिए गए शब्दों में छूटे हुए अक्षर लिखकर शब्दों को पूरा करो। (3)

i. कि---रा ii. योज--- iii. तला---

(ख) सही वर्तनी वाले शब्दों पर गोला लगाओ। (3)

i. चकित चकीत चाकित

ii. हीममत हिम्मत हम्मत

iii. कोशिश कौशिश कोशीश

(ग) अक्षरों को सही क्रम में लिखकर शब्द बनाओ। (2)

i. ई कि सा ल

ii. मा ल अ री

(घ) नीचे लिखे वाक्यों को ठीक करके लिखो। (2)

i. हवाई जहाज़ आसमान उड़ रहा है।

मुद्रित पृष्ठों की संख्या : 10

परमाणु ऊर्जा शिक्षण संस्था, मुंबई

वार्षिक परीक्षा-अभ्यास प्रश्नपत्र-II / Annual Examination Practice Paper-II

कक्षा : तीसरी

समय : 3 घंटे

विषय : हिंदी

पूर्णांक : 80

भाग-1 : पठन क्षमता पर आधारित प्रश्न - 20 अंक

1. नीचे लिखे पठित गद्यांश को पढ़कर प्रश्नों के उत्तर लिखिए । 5 अंक

मीरा बहन का जन्म इंग्लैंड में हुआ था। गांधी जी के विचारों का उन पर इतना असर हुआ कि वे अपना घर और अपने माता-पिता को छोड़कर भारत आ गईं और गांधी जी के साथ काम करने लगीं। आजादी के पाँच साल बाद उन्होंने उत्तर प्रदेश के एक पहाड़ी गाँव, गेंवली में गोपाल आश्रम की स्थापना की। उस आश्रम में मीरा बहन का बहुत सारा समय पालतू पशुओं की देखभाल में बीतता था लेकिन गेंवली गाँव के आसपास के जंगलों में बाघ जैसे खतरनाक जानवर भी रहते थे।

क) मीरा बहन का सारा समय किस काम में बीतता था ? (1)

उत्तर : -----

ख) मीरा बहन ने गोपाल आश्रम की स्थापना किस गाँव में की ? (1)

उत्तर : -----

ग) इनमें से कौन सा शब्द 'असर' का समान अर्थ है ? (1)

i) प्रभाव ii) बेअसर iii) गहरा

घ) मीरा बहन, घर और अपने माता-पिता को छोड़कर भारत क्यों आ गईं? (1)

उत्तर : -----

इ) 'पालतू' का विलोम शब्द क्या है ? (1)

उत्तर : -----

2. नीचे लिखे पठित कविता को पढ़कर प्रश्नों के उत्तर लिखिए । 5 अंक

एक काबुलीवाले की कहते हैं लोग कहानी,
लाल मिर्च को देख गया भर उसके मुँह में पानी।
सोचा, क्या अच्छे दाने हैं, खाने से बल होगा,
यह जरूर इस मौसिम का कोई मीठा फल होगा।
एक चवन्नी फेंक और झोली अपनी फैलाकर,
कुँजड़िन से बोला बेचारा ज्यों- त्यों कुछ समझाकर।
लाल-लाल, पतली छीमी हो चीज़ अगर खाने की,
तो हमको दो तोल छीमियाँ फ़कत चार आने की।
हाँ, यह तो सब खाते हैं - कुँजड़िन झट से बोली,
और सेर भर लाल मिर्च से भर दी उसकी झोली।

क) काबुलीवाले को मिर्च देखकर उसके मुँह में क्या भर आया ? (1)

उत्तर : -----

ख) 'मौसिम' का क्या अर्थ होता है? (1)

उत्तर : -----

ग) काबुलीवाले ने कितने पैसों की छीमियाँ खरीदना चाहा ? (1)

उत्तर : -----

घ) ' कहानी ' का विपरीत शब्द लिखिए | (1)

उत्तर : -----

ड) कुँजड़िन का मुख्य पेशा (कार्य) क्या है ? (1)

उत्तर : -----

3. नीचे लिखे अपठित गद्यांश को पढ़कर प्रश्नों के उत्तर लिखिए | 10 अंक

एक बार एक किसान का बैल गहरे गड्ढे में गिर गया। वह जोर-जोर से रोने लगा। किसान उसे निकालने के उपाय सोचने लगा। किसान ने अपने सभी पड़ोसियों को मदद के लिए बुलाया। सभी ने मिलकर गड्ढे में मिट्टी डालना शुरू कर दिया।

किसान ने नीचे देखा तो हैरान रह गया। बैल अपनी पीठ पर गिरी मिट्टी को हिलाकर नीचे गिरा देता था और उस मिट्टी पर चढ़ जाता था। शीघ्र ही वह गड्ढे के किनारे पर पहुंच गया | बैल अपने साहस और सूझबूझ के बल पर बाहर निकल सका।

क) लिंग बदलिए | (1)

बैल : -----

ख) बैल किसके बल पर गड्ढे से बाहर निकल सका ? (2)

उत्तर : -----

ग) विलोम शब्द लिखिए | (1)

जोर-जोर x -----

घ) वचन बदलिए | (1)

गड़ढ़ा : -----

ङ) बैल अपनी पीठ पर गिरी मिट्टी से क्या करता था ? (2)

उत्तर : -----

च) बैल को निकालने में किसान को किसने मदद की ? (1)

उत्तर : -----

छ) समान अर्थ लिखिए | (1)

उपाय : -----

ज) गद्यांश से ' बहुत जल्दी ' का समान अर्थ वाला शब्द ढूंढिए | (1)

उत्तर : -----

भाग-2: पाठ्य-पुस्तक पर आधारित प्रश्न : 10 अंक

क) शिवदास ने गुरुजी की थैली देखकर अपनी गाड़ी (साईकिल) क्यों दे दी ? (2)

उत्तर : -----

ख) लोग मीरा बहन के पास पहुँचें | क्यों ? (2)

उत्तर : -----

ग) दो ऐसे फलों के नाम बताइए जिन्हें छिलके के साथ नहीं खा सकते ? (2)

उत्तर : -----, -----

घ) रोटी के कोई दो नाम लिखिए | (2)

उत्तर : -----, -----

ङ) सेठ ने अवन्ती को किस रंग में कपड़ा रंगने के लिए कहा ? सेठ अवन्ती से कपड़ा लेने कब आया होगा ? (2)

उत्तर : -----

भाग-3 : रचनात्मक लेखन पर आधारित प्रश्न : 10 अंक

क) सर्दी के मौसम पर कोई पाँच वाक्य लिखिए ।

(5)

उत्तर : -----

ख) चित्र को ध्यान से देखिए और कोई पाँच वाक्य लिखिए ।

(5)



उत्तर : -----

भाग-4: व्याकरण पर आधारित प्रश्न : 15 अंक

क) इन मुहावरों के अर्थ लिखिए । (2)

i) दीया तले अंधेरा : -----

ii) नौ-दो ग्यारह होना : -----

ख) इन शब्दों के वचन (बहुवचन) बदलिए । (2)

i) रोटी : -----

ii) उँगली : -----

ग) नीचे लिखे वाक्यों में सही निशान लगाइए । (2)

!

?

i) मैं बूढ़े आदमी को क्या बताना चाहता था

ii) नानी चीख उठी -साँप

घ) लिंग बदलिए । (2)

i) बाघ : -----

ii) सेठ : -----

इ) इन जानवरों की बोलियाँ लिखिए । (2)

i) गाय : -----

ii) गधा : -----

च) सही शब्द जोड़कर इन वाक्यों को ठीक कीजिए ।

i) पहाड़ी गाँव बाघ का डर बना रहता है । (1)

उत्तर : -----

ii) पिंजड़े बाघ फँस गया होगा । (1)

उत्तर : -----

छ) इन शब्दों से वाक्य बनाइए । (3)

i) चलते - चलते : -----

ii) मंसूबा : -----

iii) बाज़ार :-----

भाग-5 : शब्दावली पर आधारित प्रश्न : 10 अंक

क) सही मिलन कीजिए । (4)

कॉलम -अ

कॉलम-ब

i. प्रशंसा

a) अवश्य

ii. कतई

b) ऊँची

iii. बुलंद

c) बड़ाई

iv. ज़रूर

d) बिल्कुल

ख) उदाहरण के अनुसार उत्तर दीजिए । (4)

उदाहरण: गाय, बकरी , भैंस , गदहा - जानवरों के नाम

i) आम महुआ, केला, सेब : -----

ii) गंगा , यमुना ,सोन सिंधु : -----

iii) बैंगन, मूली, टमाटर, आलू : -----

iv) गेहूँ,चावल, बाजरा , रागी : -----

ग) मात्रा बदलने से अर्थ बादल जाता है | अब इन दोनों शब्दों के अर्थ बताइए | (2)

दीन : -----

दिन - -----

भाग-6 : वर्तनी पर आधारित प्रश्न : 10 अंक

क) उदाहरण के अनुसार शब्दों को लिखिए । (4)

उदाहरण : पढ़ - पढ़ाई

i) साफ - -----

ii) चढ़ - -----

iii) बुन - -----

iv) रंग - -----

ख) इन शब्दों को सही करके लिखिए । (4)

i) मीर्च - -----

ii) साईकिल - -----

iii) आखीर - -----

iv) नारीयल - -----

ग) इन वाक्यों को सही करके किखिए ।

(2)

i) केले छोटा का होता पेड़ है ।

उत्तर : -----

ii) सुबह की पिंजड़ा होते ही लोग रोशनी देखने पड़े निकल ।

उत्तर : -----

भाग : 7 - सुलेख

5 अंक

नीचे लिखे वाक्यों को सुंदर अक्षरों में लिखिए ।

हमें हर दिन विद्यालय जाना चाहिए । हमें अपने शिक्षकों की बात माननी चाहिए।हमें सुबह जल्दी उठना चाहिए। हमें रोजाना अपने दांत साफ करने की आदत डालनी चाहिए। हमें हर दिन नहाना चाहिए। हमें अपने बड़ों की बात सुनकर उनका सम्मान करना चाहिए। हमें रोजाना अध्ययन करना चाहिए । हमें रोजाना गृह-कार्य करके विद्यालय जाना चाहिए ।

उत्तर : -----

परमाणु ऊर्जा शिक्षण संस्था

ATOMIC ENERGY EDUCATION SOCIETY

वार्षिक परीक्षा- अभ्यास प्रश्नपत्र-III / Annual Examination Practice Paper-III

कक्षा/Class : तीसरी /3

अवधि/Duration : 3 घंटे / hours

विषय/Subject : हिंदी/Hindi

अधिकतम अंक/Maximum Marks :80

प्र.1 निम्नलिखित गद्यांश को पढ़कर नीचे लिखे प्रश्नों के उत्तर लिखो।

5x1=5

एक दिन बालक ने अपने अहाते में एक छोटा-सा साँप रेंगते देखा। वह धीरे-धीरे रेंग रहा था। उसको देखते ही वह भागा और वही पर पड़े हुए नारियल के एक खोल में घुसकर छिप गया। उसने पत्थर का एक टुकड़ा उठाया और उससे नारियल के खोल का मुँह बंद कर दिया। उसे लेकर वह नानी के पास दौड़ गया।

1. बालक ने अहाते में किसे देखा ?

2. साँप कहाँ छिप गया ?

3. बालक किसके पास दौड़ गया ?

4. लिंग बदलो।

उदाहरण : चाचा - चाची

नाना - -----

5. अर्थ लिखो।

भागना = -----

प्र.2 निम्नलिखित गद्यांश को पढ़कर नीचे लिखे प्रश्नों के उत्तर लिखिए।

5x1=5

अवंती ने एक छोटी-सी रंगाई की दुकान खोली और गाँववासियों के लिए कपड़ा रंगना शुरू कर दिया। सब लोग उसकी रंगाई की प्रशंसा करने लगे। धीरे-धीरे उसकी दुकान चल निकली। अवंती की प्रशंसा सुनकर एक सेठ को बहुत ईर्ष्या महसूस होने लगी। अवंती को परेशान करने के लिए वह सेठ कपड़े का एक टुकड़ा लेकर अवंती की दुकान में जा पहुँचा।

1. अवंती ने कौन-सी दुकान खोली ?

2. अवंती की प्रशंसा सुनकर किसे ईर्ष्या हुई ?

3. सेठ अवंती की दुकान में क्यों जा पहुँचा ?

4. अर्थ लिखो।

जलन = -----

5. रंग शब्द से कौन-सा शब्द बना है ?

रंग - -----

प्र.3 नीचे दिए गए गद्यांश को पढ़कर पूछे गए प्रश्नों के उत्तर लिखो।

10x1=10

फूल बहुत आकर्षक होते हैं। ये अनेक रंगों के होते हैं। फूलों की सुगंध मधुर होती है। ये बहुत लोकप्रिय होते हैं। इनमें से कुछ ज़मीन पर उगते हैं और कुछ पानी में उगते हैं। लिली तथा कमल पानी में उगते हैं।

चमेली, गुलाब, गेंदा, ट्यूलिप, सूरजमुखी आदि फूल ज़मीन पर उगते हैं।

ज़्यादातर फूल मौसमी होते हैं। वे एक खास मौसम में उगते हैं। इनमें से कुछ वर्ष भर उगते हैं। फूल बहुत उपयोगी होते हैं। ये सजावट के लिए उपयोग में लाए जाते हैं। इनमें से कुछ इत्र या सुगंध बनाने में भी उपयोगी होते हैं। खास अवसरों पर हम फूलों को भेंट के रूप में देते हैं। मधुमक्खियाँ फूलों से रस इकट्ठा करती हैं और उससे शहद बनाती हैं। शहद सेहत के लिए बहुत अच्छा होता है।

कमल हमारा राष्ट्रीय फूल है ।

1. लिली और कमल कहाँ उगते हैं?

2. मौसमी फूल किसे कहते हैं?

3. क्या फूलों से इत्र बना सकते हैं ?

4. तुम्हारा प्रिय फूल कौन सा है ?

5. हमारा राष्ट्रीय फूल कौन सा है ?

6. सही विकल्प चुनकर सही का निशान लगाओ ।

1. फूलों को भेट के रूप में कब देते हैं ?

क) जब हम सो जाते हैं

ख) खास अवसर पर

ग) जब हम खाना खाते हैं

घ) जब हम बाज़ार जाते हैं

7. उलटे अर्थ वाला शब्द लिखो ।

1. खुशबू x -----

8. अर्थ लिखो ।

1. खास = -----

9. दो फूलों के नाम लिखो ।

1. ----- 2.-----

प्र.4 नीचे लिखे प्रश्नों के उत्तर एक या दो वाक्यों में लिखो ।

4x2=8

1. तुम्हें अगर पेड़ लगाना हो तो तुम कौन-सा पेड़ लगाओगे? तुम वही पेड़ क्यों लगाना चाहोगे ?

2. काबुलीवाले ने मिर्च को स्वादिष्ट फल क्यों समझ लिया ?

3. लोग मीरा बहन के पास पहुँचे । क्यों ?

4. सेठ कपड़ा लेने किस दिन आया होगा ?

प्र.5 प्रश्नों के उत्तर एक वाक्य में लिखो।

2x1=2

1. गुरूजी थैली में क्या लिए जा रहे थे ?

2. मीरा बहन का जन्म कहाँ हुआ था ?

प्र.6 नारियल के पेड़ के बारे में पाँच वाक्य लिखो।

1x5=5

प्र.7 आफ़ंती के बारे में पाँच वाक्य लिखो।

1x5=5

(उसके कपड़े, शक्ल-सूरत, पालतू पशु, बुद्धि आदि के बारे में भी बता सकते हो।)

प्र.8 (क) अर्थ लिखो।

1x15=15

1. बुलंद = -----
2. ईर्ष्या = -----
3. कतई = -----
4. ज़रूर = -----

(ख) नीचे लिखे वाक्यों में सही निशान लगाओ।(|, !, ?)

1. नानी चीख उठी साँप
2. क्या तुम बाज़ार चलोगी
3. साँप धीरे-धीरे रेंग रहा था

(ग) उदाहरण के अनुसार शब्द बनाओ। जैसे :- साफ़ - सफ़ाई

1. चढ़ - -----

2. बुन - -----

(घ) वाक्य बनाओ।

1. धीरे-धीरे -----

2. पीछे-पीछे -----

(ङ) नीचे दिए गए जानवरों के नाम और उनकी बोलियों को मिलाओ।

<u>जानवर</u>	<u>बोलियाँ</u>
▪ भैंस	मिमियाना
▪ घोड़ा	रँभाना
▪ हाथी	चिंघाड़ना
▪ बकरी	हिनहिनाना

प्र.9(क) नीचे लिखे वाक्यों में कुछ सब्जियों के नाम छुपे हैं। उन्हें ढूँढकर लिखो।

1x10=10

1. अब भागो भी, बारिश होने लगी है। -----

2. मामू लीला मौसी कहाँ है ? -----

3. रानी बोली - हमसे मत बोलो। -----

4. गोपाल कबूतर उड़ा दो। -----

(ख) इन वाक्यों में जिनकी ज़रूरत नहीं है, ऐसे शब्द ढूँढकर अलग करो।

1. बाज़ार से हरा धनिया पत्ती भी ले आना। -----

2. एक पीला पका पपीता काट लो। -----

(ग) रोटी के और नाम पता करके लिखो ।

1. -----

2. -----

(घ) नीचे लिखी हुई चीज़ें क्या हैं ? खाली जगह में लिखो ।

1. जलेबी, लड्डू, मैसूरपाक, कलाकंद, पेड़ा - -----

2. नर्मदा, कावेरी, सतलुज, ब्रह्मपुत्र, यमुना - -----

प्र.10(क) उन कीड़ों (जंतुओं) का नाम लिखो जो डंक मारते हैं। 1x10=10

1. -----

2. -----

(ख) शब्दों के ऐसे जोड़े बनाओ जिसमें मात्रा बदलने से अर्थ भी बदल जाता है। जैसे: दीन-दिन

1. -----

2. -----

(ग) मुहावरे पूरे करो ।

1. दीपक तले -----

2. एक और एक -----

(घ) तुम्हारे मुँह में किन चीज़ों को देखकर पानी आ जाता है ?

1. -----

2. -----

(ङ) इन मौकों पर तुम किस पेड़ के पत्ते का इस्तेमाल करोगी -

1. रंग बनाने के लिए: -----

2. बारिश में भीगते समय छाते की तरह: -----

प्र.11 नीचे लिखे अनुच्छेद का सुंदर अक्षरों में सुलेख लिखो। (5)

कहानी सुनाने के कई अलग तरीके होते हैं। कोई आवाज़ बदल-बदलकर कहानी सुनाता है तो कोई आँखें मटकाकर। कोई हाथ के इशारों से बात आगे बढ़ाता है तो कोई गाकर और नाचकर भी कहानी को सुनाता है। आज भी कई लोग पुरानी कहानियों को नाच-गाकर सुनाते हैं। कहानी सुनाना भी एक कला है।



परमाणु ऊर्जा शिक्षण संस्था

Atomic Energy Education Society

वार्षिक परीक्षा- अभ्यास प्रश्नपत्र-I/ Annual Examination Practice Paper-I

कक्षा / Class : III

अवधि / Duration : 3 hours

विषय / Subject : Maths

अधिकतम अंक / Maximum Marks : 80 M

SECTION-A (20 Marks)

Q1. Choose the correct answer and fill in the blanks.

(1 x 6 = 6)

a) _____ 250g weight make a kilogram. (2 , 4 , 3)

b) 12 chicks have _____ legs. (24 , 36 , 48)

c) A water tank holds 1000 _____ of water. (litres , millilitre , grams)

d) 500 paise = _____ rupees . (50 , 5 , 100).

e) The next number in the series is - 9A , 18B, 27C, _____ (45E, 36D, 54F)

f) The numbers that end with 0,2,4,6 and 8 are called _____ numbers.

(even , odd , prime)

Q2. Do as directed

(2 x 5 = 10)

a) Find the secret message.

i) AHBACVDE EA FNGIHCIE JDKALY.

ii) 3I3N3D3I3A 3I3S 3M3Y 3C3O3U3N3T3R3Y.

b) Write the following names in alphabetical order.

Neetu , Vimala , Deepthi , Radha.

c) 5 big mangoes can balance a pumpkin.

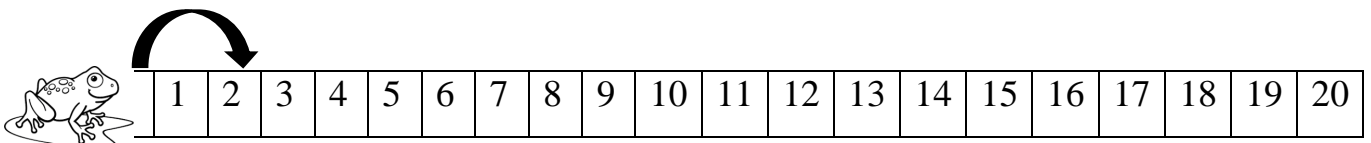
i) _____ big mangoes can balance 3 pumpkins.

ii) 25 big mangoes can balance _____ pumpkins.

d) A frog jumps 2 steps at a time. If it starts from zero,

i) It will be at the number _____ on 6th jump.

ii) It will be at the number 20 on _____ jump.



e) Look at the table and answer the following

Sweets	Number of children
Jamun	37
Laddoo	45
Jalebi	24
Halwa	19

i) _____ sweet is liked by most number of students. (Laddoo / Halwa)

ii) 37 students like _____. (Jamun / Jalebi)

Q3. Do as directed

(1 x 4 = 4)

a) Which one needs a bigger bag ?

i) 1kg popcorn or 1kg groundnut : _____

ii) 1kg Dal or 1kg cotton : _____

b) What will you use (grams / kilograms) to measure the weight of the following things ?

i) A sack of wheat : _____

ii) A spoon of salt : _____

iii) A big watermelon : _____

iv) A handful of mustard : _____

SECTION- B (20 Marks)

Q4. Choose the correct answer and fill in the blanks.



(1 x 6 = 6)

a) Choose the heaviest weight: _____ (25 grams , 5 kilograms , 50grams)

b) Complete the number pattern : 2, 3, 6, 11, _____ (18 , 19 , 20)

c) 5 times 8 is written as _____ (8 x 5 , 5 + 8 , 5 x 8)

d) There are 24 footprints of goats. So, there are _____ goats in all. (6 , 8 , 4)

e) If  stands for 5 students, then  stands for _____ students

(10 , 15 , 20)

f) _____ 25 paise coins make a rupee. (two , three , four)

Q5. Answer the following questions.


(2 x 5 = 10)

a) Fill in the missing number

i) $\square \times 7 = 56$

ii) $\square \div 4 = 1$

b) Draw 18 stars . Put them into 2 equal groups.



There are _____ stars in each group .



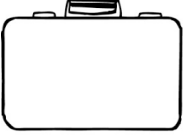

c) Write all the odd numbers between 305 to 315

d) A mug holds 3 glasses of water.

i) _____ glasses of water is needed to fill 4 mugs.

ii) 18 glasses of water is needed to fill _____ mugs.

e) Match the following things with their correct weights

Object	Weight
	2 kg
	More than 1000kg
	Less than a kilogram
	10 kg

Q6. Do as directed

(1 x 4 = 4)

a) The grades obtained by class 3 students in PT-2 are given in the table.

(😊 = 5 students)

Grade	No of students
Excellent	😊 😊 😊
Very Good	😊 😊 😊 😊
Good	😊 😊 😊
CDB	😊

- i) _____ and _____ grades were obtained by the same number of students.
- ii) Total number of students in class 3 is _____ .
- iii) Number of children who got Very Good is _____

SECTION- C (20 Marks)

Q7. Do as directed

(1 x 6 = 6)

a) State True or False.

- i) 5 notes of Rs 20 is Rs 25 ()
- ii) The sum of $19 + 1$ is an even number. ()

b) Fill in the blanks.

- i) $36 \div 3 =$ _____
- ii) $\text{Rs } 5.50 + \text{Rs } 2 =$ _____
- iii) If $4 \times 6 = 24$,then $40 \times 60 =$ _____
- iv) $700\text{g} +$ _____ $\text{g} = 1\text{kg}$.

Q8. Solve the following

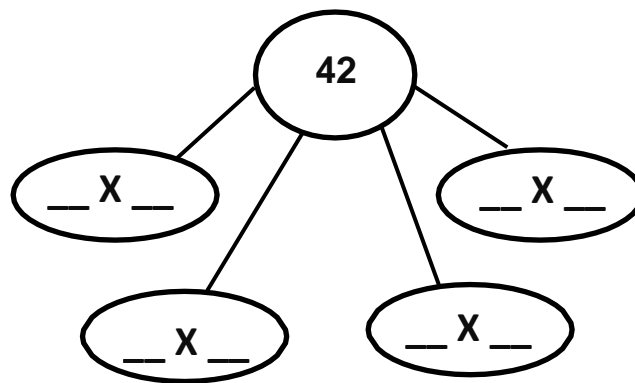
(2 x 5 = 10)

a) Bottle B holds 15 glasses of water .Bottle A holds twice as much as bottle B.

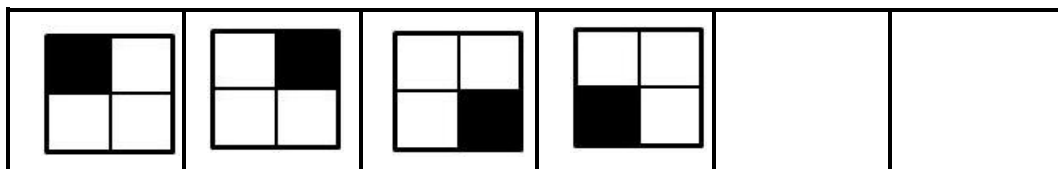
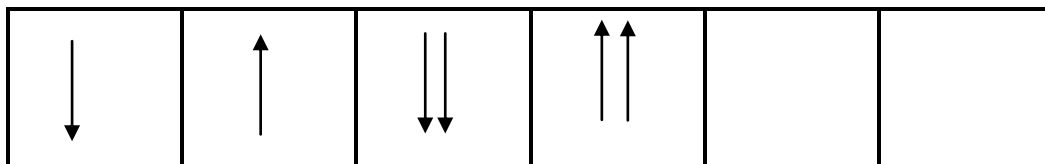
How many glasses of water is needed to fill bottle A?



b) Complete the multiplication tree .

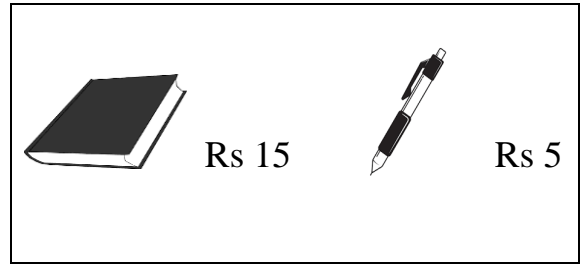


c) Observe the pattern and continue



d) Amit bought 48 toffees on his birthday. He distributed equally among 6 of his friends. How many toffees did each of his friend get ?

e) Find the total cost of 2 books and 2 pens



Q9. Solve the following

(1 x 4 = 4)

a) Multiply by box method 26 x 45

X	20	6
40		
5		

Total

SECTION- D (20 Marks)

Q10. Fill in the blanks

(1 x 6 = 6)

a) $6 + 6 + 6 + 6 = \underline{\hspace{2cm}} \times 6$

b) Cost of a balloon is Rs 6. Cost of 12 balloons is Rs .

- c) _____ children can wear 18 socks.
- d) 2 kilogram = _____ grams.
- e) Number of bananas in 2 dozen = _____ bananas.
- f) Complete the pattern: 80Z , 78Y , 76X , _____.

Q11. Do as directed

(2 X 5 = 10)

- a) Garima had to pour 15 glasses of water to fill a pot. Pooja had to pour 30 glasses of water to fill the same pot.
 - i) Whose glass holds more water ? _____ . (Garima's / Pooja's)
 - ii) Garima's glass can hold _____ as much as Pooja's glass (twice / half)

- b) A design has 12 flowers in it. A piece of cloth has 17 such designs. How many flowers in all are there on the cloth ?

c) ADD

$$\begin{array}{r}
 \text{Rs } 25.50 \\
 + \text{Rs } 40.50 \\
 \hline
 \hline
 \end{array}$$

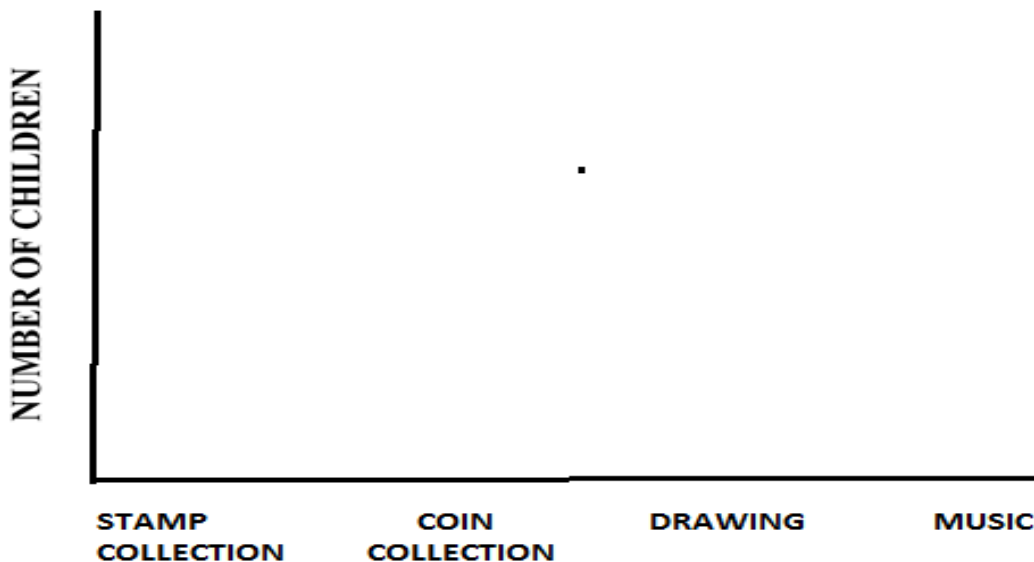
 SUBTRACT

$$\begin{array}{r}
 \text{Rs } 68.00 \\
 - \text{Rs } 23.50 \\
 \hline
 \hline
 \end{array}$$

d) Five friends found a 100 rupee note. If they share it equally among themselves, how much each one will get ?

e) The table given below shows the hobbies of children of Class 3. Represent the given data by drawing faces in the chart given below. (draw one 😊 face for each child)

Hobbies	Number of children
Stamp collection	6
Coin collection	5
Drawing	8
Music	7



Q12. Solve the following

(1 x 4 = 4)



i) _____ x 100 rupees = _____ rupees

ii) _____ x 50 rupees = _____ rupees

iii) _____ x 20 rupees = _____ rupees

iv) _____ Total = _____ rupees

=====




परमाणु ऊर्जा शिक्षण संस्था
Atomic Energy Education Society

वार्षिक परीक्षा- अभ्यास प्रश्नपत्र-II / Annual Examination Practice Paper-II
कक्षा/Class : III अवधि / Duration : 3 hours
विषय/ Subject : Mathematics अधिकतम अंक/ Maximum Marks : 80

Section A (20 Marks)

Q1. Choose the correct answer and fill in the blanks. (1 x 6 = 6)

a) 1 kilogram = _____ grams. (10, 1000, 100)

b) Six  ave _____ legs. (24, 60, 40)

c) Find the missing number in the given pattern.

5, 10, 15, 20, 25, _____, 35 (28, 30, 32)

d) 5000 millilitres = _____ litres. (5, 25, 50)

e) Eight 50 paise coins make _____ rupees. (2, 4, 6)

f) There are 28 candles. If you put them equally in 4 boxes.
_____ candles are there in each box. (12, 7, 8)

Q2. Do as directed.

(2 x 5 = 10)

a) 6 potatoes of same size weigh 1 Kg

- i. _____ potatoes weigh 500 g.
- ii. _____ potatoes weigh 3 Kg.

b) Write the following names in alphabetical order.

Raja Kavita Narayan Elvis

c) Find and write the secret message.

i) 0H0A0V0E0 0A0 0N0I0C0E0 0D0A0Y0

ii) 1I2 3L4O5V6E7 8M9Y10 11I12N13D14I15A16

d) Match the following.

- | | |
|----------------------|-------------|
| i) $16 \div 4$ | a) 50 paise |
| ii) Half rupee | b) 4 |
| iii) 20×5 | c) 1 litre |
| iv) 1000 millilitres | d) 100 |

e) The chart given below is to show the number of students who are absent.

Look at the chart and fill in the blanks.

Class	Number of students absent
Class I	2
Class II	5
Class III	10
Class IV	7
Class V	12

i) The class with the highest number of absent students is

ii) The class with 7 students absent is

Q3. Do as directed.

(1 x 4 = 4)

a) Circle the heavier thing.

a brick or a geometry box

b) Fill in the blanks.

i) $4 + 4 + 4 + 4 + 4 =$ _____ $\times 4 =$ _____

ii) 2 dozen bananas = _____ bananas.

iii) Write any two even numbers between 121 to 129

Section B (20 Marks)

Q4. Tick the correct answer.

(1 x 6 = 6)

a) _____ numbers end with 1,3,5,7 and 9. (Odd, Even)

b) 5 times 7 is written as _____ (5-7, 5+7, 5x7)

c) What is the missing number.

$$50 \div \boxed{} = 10 \quad (10, 5, 4)$$

d) $12 \times 4 \times 0 =$ _____ (36, 48, 0)

e) How many 5-rupee coins will make 20 rupees. (5, 4, 10)

f) Repeated addition is also known as _____

(multiplication, division, subtraction, addition)

Q5. Answer the following questions.

(2 x 5 = 10)

a) One rail coach has 8 wheels. How many wheels in all in 6 coaches?

b) Complete the following patterns.

i) 100, 95, 90, 85, 80, _____, _____

ii) 21A, 22B, 23C, 24D, _____, _____

c) How much money do the following notes and coins make?



The total amount = _____ rupees and _____ paise.

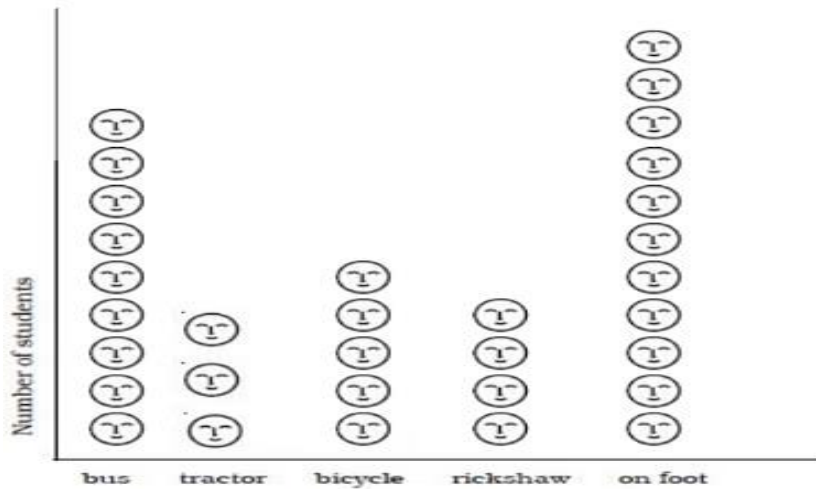
d) Lakshmi has 42 kg potatoes to sell. Six men came and bought equal amounts of potatoes. How many kg potatoes did each man buy?

e) Write the names of any two containers.

i) That hold more than a litre of liquid-

ii) That hold less than a litre of liquid-

Q6. The chart given below shows the number of students of class III come to school by. Each ☺ represents 2 students. (1 x 4 = 4)



Look at the chart above and fill in the blanks.

- The most students come to school _____
- The number of students walking to school is _____
(more/less) than the students coming on bicycle.
- The least number of students come to school by _____
- The total number of students of class III is _____

Section C (20 Marks)

Q7. Choose the correct answer and fill in the blanks. (1 x 6 = 6)

- 500 millilitres + 250 millilitres + 250 millilitres = _____
(900 millilitres, 100 millilitres, 1 litre, 10 litres)
- There are 20 blue socks. _____ girls can wear those socks while going to school.
(10, 5, 20)

c) $30 \times \underline{\hspace{2cm}} = 150.$

(3, 5, 7)

d) $\text{Rs } 5 + \text{Rs } 2.50 = \underline{\hspace{2cm}}$

(Rs 3, Rs 5.50, Rs 7.50)

e) $90 \div 5 = \underline{\hspace{2cm}}.$

(10, 16, 18)

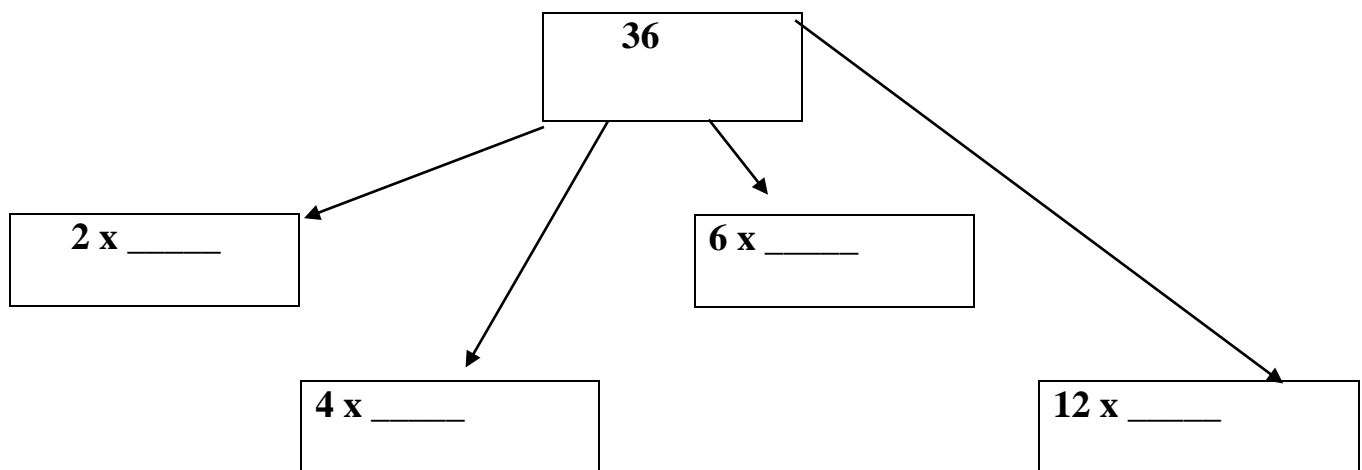
f) $200 \text{ grams} + 200 \text{ grams} + 100 \text{ grams} = \underline{\hspace{2cm}}$

(1 kilogram, half kilogram, 2 kilograms)

Q8. Do as directed.

(2 x 5 = 10)

a) Complete the given multiplication tree (Factor Tree)



b) Circle the odd numbers.

313 208 517 600 221 537 420

c) Add Rs 25.75

d) Subtract Rs 63.25

+ Rs 16.75

- Rs 52.50


e) There are 15 desks in a classroom. Each desk has 4 legs. What is the total number of legs of these desks?

Q9. Multiply using box method.

(1 x 4 = 4)

54 x 73

X	50	4
70		
3		



Answer - _____

Section D (20 Marks)

Q10. Fill in the blanks.

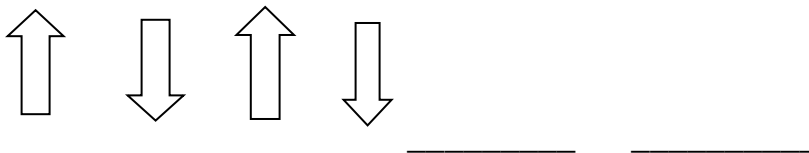
(1 x 6 = 6)

a) If you add 1 to any other odd number, we get an _____ number.
(odd, even)

b) 23 less than 50 rupees is _____ rupees.
(47, 37, 27)

c) 1 kilogram – 250 grams = _____ grams
(500, 750, 650)

d) Complete the sequence.



e) We take medicine in_____.

(millilitre, litre, kilograms)

f) Complete the following pattern

1, 3, 7, 13, _____, _____.

(15, 17 21,31 17,19)

Q11. Do as directed.

(2 x 5 = 10)

a) Match the following.

- | | |
|---------------------|----------------------------------|
| i) bucket | a) less than $\frac{1}{2}$ litre |
| ii) eye drop bottle | b) about 12 litres |
| iii) water suraahi | c) 1000 litres |
| iv) water tank | d) about 5 litres |

b) State 'true' or 'false'

- i) 1 rupee = 100 paise _____
- ii) 5 triangles have 12 angles. _____
- iii) 6 goats will make 20 footmarks. _____
- iv) 1 litre = 100 millilitres. _____

c) Look at the price list and answer the following.

PRICE	LIST
A notebook	Rs 5
A pencil	Rs 2.50
A toy car	Rs 15
A ball	Rs 7.50

i) What is the total cost of a pencil and a ball?

ii) Which item is the costliest among all four items?

d) Pothole A gets filled with 6 mugs of pebbles.

Pothole B gets filled with 18 mugs of pebbles.

Pothole C gets filled with 3 mugs of pebbles.

i) Which is the biggest pothole?

ii) If jugs are used, pothole C gets filled with 2 jugs, how many jugs of pebbles are needed to fill pothole B?

e) Circle the names that have the same pattern.

Harsh, Anna, Kanak, Munna

Q12. Solve the following.

(1 x 4 = 4)

The board shows the number of students in each class. It also shows the number of students present and absent.

ATTENDANCE BOARD			Date – 01-04-2023
Class	Number of students	Students present	Students absent
Class I	25	21	4
Class II	32	25	7
Class III	35	33	2
Class IV	38	38	0
Class V	36	30	6
Total			

a) The class the highest number of absent students is _____

b) The class in which all the students are present is _____

c) How many children in all are there in the school?

d) How many children in all are absent on that day?



परमाणु ऊर्जा शिक्षण संस्था
Atomic Energy Education Society

वार्षिक परीक्षा- अभ्यास प्रश्नपत्र-III / Annual Examination Practice Paper-III

कक्षा / Class : III

अवधि / Duration : 3 Hours

विषय / Subject : Mathematics

अधिकतम अंक / Max. Marks: 80

Section A - KNOWLEDGE (20 marks)

I) Choose the correct answer and fill in the blanks. (1x6=6)

- a) Light objects are weighed in _____. (litres, grams, metres)
- b) $5 + 5 + 5$ can be written as _____. (3×5 , 5×3 , $5 + 3$)
- c) If we add an even number to an odd number, we get an _____ number.
(even, odd, square).
- d) 1 litre = _____ millilitres. (100, 1000, 500)
- e) $20 \text{ } \underline{\quad} 4 = 5$. (\times , \div , $+$)
- f) Four notes of 50 rupees make _____ rupees. (200, 450, 350)

II. Do as directed. (5x2=10)

a) Circle the one that will need a bigger bag.

- 1) 2kg green peas, 2kg tomatoes
- 2) 1kg jaggery, 1kg popcorn

b) A box has 8 oranges. How many oranges will 5 such boxes have?



c) Add the following.

- 1) Rs.5 8. 7 5
+ Rs.1 4. 2 5

- 2) 4 5 0
+ 3 9 7

d) Complete the pattern.

1) , , , , _____, _____.

2) , , , , , , _____, _____.



e) Underline the words that can be read both forward and backward in the same way.

MADAM, MOON, EYE, NOON, REAR, SWIMS, BIB

III) Solve the following.

(4x1= 4)

Look at the picture and fill in the blanks.



- a) There are _____ butterflies in all.
- b) They are in _____ groups.
- c) There are _____ butterflies in each group.
- d) _____ ÷ _____ = _____

Section B - UNDERSTANDING (20 Marks)

I) Fill in the blanks.

(6x1= 6)

- a) The numbers that end with 1, 3, 5, 7 and 9 are called _____ numbers.
- b) 500 gram + _____ gram = 1 kilogram.
- c) _____ is repeated addition. (Multiplication, Division)
- d) $42 \div \underline{\hspace{2cm}} = 6$
- e) 9A, 18B, 27C, _____, 45E.
- f) 96 rupees – 48 rupees = _____ rupees.

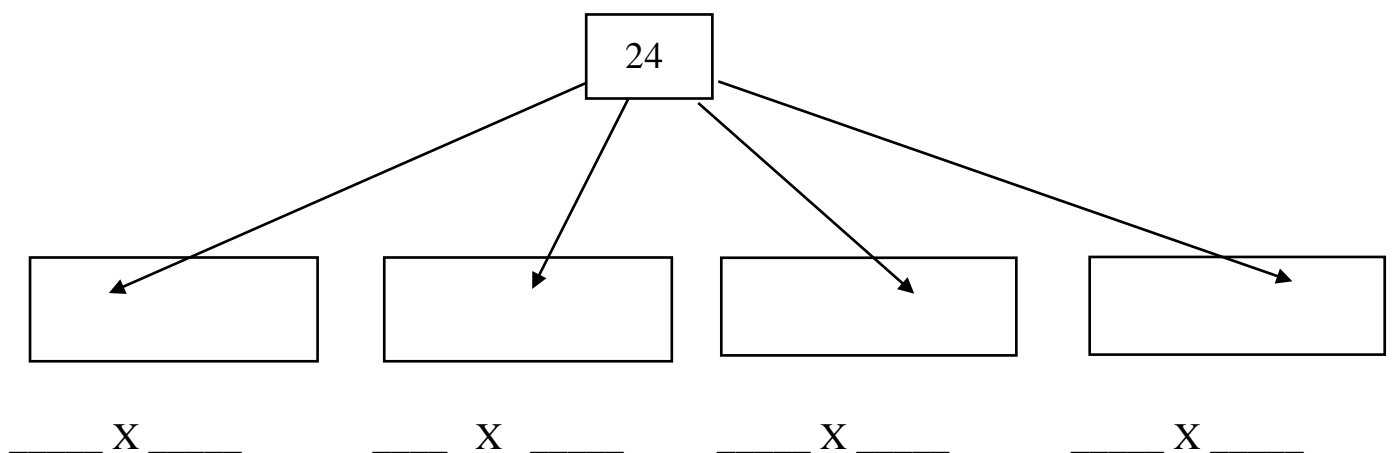
II Do as directed.

(5x2=10)

a) Tick () that is heavier.

- 1) 1kg of apples, 500g of mangoes
- 2) 250 g of tomatoes, 450 g of beetroot

b) Complete the following.



c) Find out the hidden message.

1) 1 S 2 I 3 L 4 E 5 N 6 C 7 E 8 I 9 S 10 G 11 O 12 L 13 D 14 E 15 N 16.

2) A W B H C E D R E E F A G R H E I Y J O K U L G M O N I O N P G ?

d) Match the following.

- | | |
|----------------------------------|---------------|
| 1) 1 litre | a) bucket |
| 2) 12 litres | b) water tank |
| 3) 1000 litres | c) cup |
| 4) less than $\frac{1}{2}$ litre | d) jug |

1) _____ 2) _____ 3) _____ 4) _____

e) Raj has 70 metres of rope. He distributes it equally among his 7 friends. How many metres of rope will each friend get?

III) Solve the following.**(4x1=4)**

Look at the table given below and fill in the blanks.

Colours liked by the students	Number of students
Blue	35
Red	30
Pink	20
Yellow	15

- a) Most of the students like _____.
- b) The number of students liking blue and yellow are _____.
- c) The number of students liking red and pink is _____ the number of students liking blue and yellow.(less than, equal to, more than)
- d) There are _____ students in all.

Section C - ABILITY TO COMPUTE (20 marks)**I) Write True or False.****(6x1= 6)**

- a) $20 \times 50 = 1000$ ()
- b) 6 spiders have 36 legs. ()
- c) $74 + 12 + 14 = 100$ ()
- d) The even number between 169 and 171 is 172. ()
- e) 8 times 8 is 64 ()
- f) 5 rupees 75 paise = 575 paise ()

II) Do as directed.

(5x2 = 10)

a) Multiply using box method.

$$25 \times 17$$

X		

b) Write the amount shown by the rupee notes and coins?



The total amount is _____

c) Rani has 48 minutes to make rotis. One roti takes 4 minutes. How many rotis can she make in 48 minutes?

d) Complete the number pattern.

1) 4, 8, 12, _____, _____.

2) 1, 3, 7, _____, _____.

e) Subtract.

$$\begin{array}{r} 1) \quad \text{Rs. } 262.75 \\ - \text{Rs. } 55.50 \\ \hline \end{array}$$


$$\begin{array}{r} 2) \quad 875 \\ - 366 \\ \hline \end{array}$$


III) Solve the following.

(4x1= 4)

The table given below shows the mode of transport of the students in a school.

Mode of transport	Bus	Auto rickshaw	Scooter	Car
Number of students	8	9	7	8

Represent them in the given chart using  to represent 1 student.



Section D - PROBLEM SOLVING (20 Marks)

I) Choose the correct answer from the brackets and fill in the blanks. (6x1=6)

a) $23 \times 0 =$ _____. (0, 23)

b) The weight of a big pumpkin is _____ than the weight of a pineapple.

(less, more)

c) 1, 4, 9, _____. (20, 16)

d) 72 and 88 are _____ numbers. (odd, even)

e) If 14 potatoes weigh 1kg, then _____ potatoes will weigh 2 kg. (28, 24)

f) $\frac{1}{2}$ litre + $\frac{1}{2}$ litre = _____ litre. (2, 1)

II) Do as directed.

(5x2=10)

a) The cost of one balloon is 10 rupees.

1) The cost of 7 balloons is _____ rupees

2) The cost of 15 balloons is _____ rupees.

b) Ruby goes to a shop and buys the following things. Put the correct unit (Kg or g)

a) Grapes - 2 _____

b) Dal - 500 _____

c) Carrot - 250 _____

d) Wheat - 3 _____

c) Arrange the following names in the alphabetical order.

REENA, SALIM, DHIRAJ, RUPA,

1) _____

2) _____

3) _____

4) _____

d) Arun and Tarun used their bottles to fill their pots with water.

Both the pots were of the same size.

Arun had to fill his bottle 18 times from the tap.

But Tarun had to fill his bottle only 9 times.

1) _____ bottle holds more water. (Tarun's, Arun's)

2) Arun's bottle can hold _____ (twice / thrice/ half) as much water as Tarun's bottle.

e) A rabbit jumps 7 steps at a time.

A frog jumps 5 steps at a time.

Both of them start from zero.

1) Where will the frog reach at the 5th jump?

Ans.

2) How many jumps will the rabbit take to reach 49?

Ans.

III) Solve the following.**(4x1=4)**

A train journey from New Jalpaiguri to Guwahati is shown in the table. Observe the table and answer the following questions.

Distance from New Jalpaiguri (in km)	Station	Train Fare (Rupees)
57	New Mal	32.50
175	Alipurduar	48.00
366	Goalpara	69.50
495	Guwahati	82.50

1) What is the distance from New Mal to Alipurduar?

2) What is the train fare from Goalpara to Guwahati?

3) The distance from New Jalpaiguri to New Mal is _____.

4) Bhupen travels from New Jalpaiguri to New Mal. He gives a 50 rupees note.

How much will he get back?
